

**LEIF MEJLBRO**

# **EXAMPLES OF SEQUENCES**



DOWNLOAD FREE TEXTBOOKS AT  
**BOOKBOON.COM**

Leif Mejlbro

---

# Examples of Sequences

Calculus 3c-1

---

---

Calculus 3c-1 – Examples of Sequences  
© 2008 Leif Mejlbro & Ventus Publishing ApS  
ISBN 978-87-7681-375-8

# Contents

	<b>Preface</b>	<b>5</b>
<b>1.</b>	<b>Sequences in General</b>	<b>6</b>
<b>2.</b>	<b>Summable sequences</b>	<b>17</b>
<b>3.</b>	<b>Recursively given sequences</b>	<b>20</b>
<b>4.</b>	<b>Sequences of functions</b>	<b>33</b>
<b>5.</b>	<b>Linear difference equations</b>	<b>47</b>

Please click the advert

## WHAT'S MISSING IN THIS EQUATION?

You could be one of our future talents

### MAERSK INTERNATIONAL TECHNOLOGY & SCIENCE PROGRAMME

Are you about to graduate as an **engineer** or **geoscientist**? Or have you already graduated?  
If so, there may be an exciting future for you with A.P. Moller - Maersk.



**MAERSK**

[www.maersk.com/mitas](http://www.maersk.com/mitas)

## Preface

Here follows a collection of *sequences*, including sequences, which satisfy some simple difference equations. The reader is also referred to *Calculus 3b*. Since my aim also has been to demonstrate some solution strategy I have as far as possible structured the examples according to the following form

**A** *Awareness*, i.e. a short description of what is the problem.

**D** *Decision*, i.e. a reflection over what should be done with the problem.

**I** *Implementation*, i.e. where all the calculations are made.

**C** *Control*, i.e. a test of the result.

This is an ideal form of a general procedure of solution. It can be used in any situation and it is not linked to Mathematics alone. I learned it many years ago in the Theory of Telecommunication in a situation which did not contain Mathematics at all. The student is recommended to use it also in other disciplines.

One is used to from high school immediately to proceed to **I. Implementation**. However, examples and problems at university level are often so complicated that it in general will be a good investment also to spend some time on the first two points above in order to be absolutely certain of what to do in a particular case. Note that the first three points, **ADI**, can always be performed.

This is unfortunately not the case with **C Control**, because it from now on may be difficult, if possible, to check one's solution. It is only an extra securing whenever it is possible, but we cannot include it always in our solution form above.

I shall on purpose not use the logical signs. These should in general be avoided in Calculus as a shorthand, because they are often (too often, I would say) misused. Instead of  $\wedge$  I shall either write "and", or a comma, and instead of  $\vee$  I shall write "or". The arrows  $\Rightarrow$  and  $\Leftrightarrow$  are in particular misunderstood by the students, so they should be totally avoided. Instead, write in a plain language what you mean or want to do.

It is my hope that these examples, of which many are treated in more ways to show that the solutions procedures are not unique, may be of some inspiration for the students who have just started their studies at the universities.

Finally, even if I have tried to write as careful as possible, I doubt that all errors have been removed. I hope that the reader will forgive me the unavoidable errors.

Leif Mejlbro  
13th May 2008

## 1 Sequences in General

**Example 1.1** Check if the sequence

$$a_n = \frac{n}{n+1} - \frac{n+1}{n}$$

is convergent or divergent. Find its limit, if it is convergent.

Here we have several possibilities:

**1st variant.** If the numerator and the denominator in both fractions are divided by  $n$ , it follows by the rules of calculations that

$$a_n = \frac{n}{n+1} - \frac{n+1}{n} = \frac{1}{1+\frac{1}{n}} - \left(1 + \frac{1}{n}\right) \rightarrow \frac{1}{1+0} - (1+0) = 0 \quad \text{for } n \rightarrow \infty.$$

**2nd variant.** If we remove 1 from both fractions we get

$$a_n = \frac{n}{n+1} - \frac{n+1}{n} = \left(1 - \frac{1}{n+1}\right) - \left(1 + \frac{1}{n}\right) = -\frac{1}{n+1} - \frac{1}{n} \rightarrow 0 \quad \text{for } n \rightarrow \infty.$$

**3rd variant.** If everything is put on the same fraction line, we get s

$$a_n = \frac{n}{n+1} - \frac{n+1}{n} = \frac{n^2 - (n+1)^2}{(n+1)n} = -\frac{2n+1}{(n+1)n} = -\frac{2+\frac{1}{n}}{n+1} \rightarrow 0 \quad \text{for } n \rightarrow \infty.$$

It is seen in all three variants that the sequence is convergent and its limit is 0.  $\diamond$

Please click the advert



# CHALLENGE YOURSELF

## WWW.STUDYINSWEDEN.SE

Today's job market values ambitious, innovative, perceptive team players. Swedish universities foster these qualities through a forward-thinking culture where you're close to the latest ideas and global trends.

**Si.**  
Swedish Institute

Whatever your career goals may be, studying in Sweden will give you valuable skills and a competitive advantage for your future. [www.studyinsweden.se](http://www.studyinsweden.se)

**Example 1.2** Check if the sequence

$$a_n = \frac{n^2}{n+1} - \frac{n^2+1}{n}$$

is convergent or divergent. In case of convergence, find its limit.

**1st variant.** (Does not work, but it illustrates the problem). If we reduce by  $n$  in the numerator and the denominator in the two fractions, we get

$$a_n = \frac{n^2}{n+1} - \frac{n^2+1}{n} = \frac{n}{1+\frac{1}{n}} - n - \frac{1}{n} \rightarrow \infty - \infty - 0.$$

This is an *illegal type of convergence* and nothing can be concluded in this way.

**2nd variant.** (The elegant variant). Add  $0 = -1 + 1$  to the first numerator and apply that  $n^2 - 1 = (n+1)(n-1)$ :

$$\begin{aligned} a_n &= \frac{n^2}{n+1} - \frac{n^2+1}{n} = \frac{(n^2-1)+1}{n+1} - \left\{ n + \frac{1}{n} \right\} = \frac{(n+1)(n-1)}{n+1} + \frac{1}{n+1} - n - \frac{1}{n} \\ &= n - 1 + \frac{1}{n+1} - n - \frac{1}{n} = -1 + \frac{1}{n+1} - \frac{1}{n} \rightarrow -1 + 0 - 0 = -1 \quad \text{for } n \rightarrow \infty. \end{aligned}$$

**3rd variant.** (Brute force). Put everything on the same fraction line and reduce,

$$\begin{aligned} a_n &= \frac{n^2}{n+1} - \frac{n^2+1}{n} = \frac{n^3 - (n+1)(n^2+1)}{(n+1)n} = \frac{n^3 - \{n^3 + n^2 + n + 1\}}{(n+1)n} \\ &= -\frac{n^2 + n + 1}{n^2 + n} = -1 - \frac{1}{n^2 + n} \rightarrow -1 \quad \text{for } n \rightarrow \infty. \end{aligned}$$

The latter calculation can of course be performed more or less elegant.  $\diamond$

**Example 1.3** Check if the sequence

$$a_n = \cos \frac{n\pi}{2}$$

is convergent or divergent. Find the limit in case of convergence.

It follows from

$$a_{n+4} = \cos \frac{(n+4)\pi}{2} = \cos \frac{n\pi}{2} = a_n,$$

that the values

$$a_1 = 0, \quad a_2 = -1, \quad a_3 = 0, \quad a_4 = 1,$$

are repeated cyclically, i.e. they all occur infinitely often. Thus we have four candidates of the limit, but since any possible limit is unique, it does not exist in this case, and the sequence is divergent.  $\diamond$

**Example 1.4** . Check if the sequence

$$a_n = n^{(-1)^n}$$

is convergent or divergent. Find the limit in case of convergence.

Since the subsequence

$$a_{2n} = (2n)^{(-1)^{2n}} = 2n$$

is divergent, the “bigger sequence”  $(a_n)$  (it contains more elements) must also be divergent.  $\diamond$

**Example 1.5** . Check if the sequence

$$a_n = \frac{a^n}{n}, \quad a \in \mathbb{R},$$

is convergent or divergent. Find the limit in case of convergence.

This sequence contains a parameter, and the question of convergence depends on the size of the parameter.

1) If  $|a| > 1$ , it follows from the magnitudes that

$$|a_n| = \frac{1}{n}|a|^n \rightarrow \infty \quad \text{for } n \rightarrow \infty.$$

(The exponential function “dominates” the power function in  $n$ ). In this case we have divergence.

2) If  $|a| \leq 1$ , we get the estimate

$$|a_n - 0| = |a_n| = \frac{1}{n}|a|^n \leq \frac{1}{n} \rightarrow 0 \quad \text{for } n \rightarrow \infty.$$

It follows immediately from the definition that  $(a_n)$  is convergent and that its limit is 0.  $\diamond$

**Example 1.6** . Check if the sequence

$$a_n = \ln(n^2 + 1) - 2 \ln n$$

is convergent or divergent. Find the limit in case of convergence.

The type of convergence is “ $\infty - \infty$ ”, so we first apply the functional equation of the logarithm. Thus

$$a_n = \ln(n^2 + 1) - 2 \ln n = \ln \left( \frac{n^2 + 1}{n^2} \right) = \ln \left( 1 + \frac{1}{n^2} \right).$$

Then follow at least two variants.

**1st variant.** Since  $\ln$  is continuous on  $\text{p}\ddot{\text{a}} \mathbb{R}_+$ , and  $1 + \frac{1}{n^2} \rightarrow 1$  for  $n \rightarrow \infty$ , we can interchange  $\ln$  and the limit,

$$\lim_{n \rightarrow \infty} a_n = \ln \left( \lim_{n \rightarrow \infty} \left\{ 1 + \frac{1}{n^2} \right\} \right) = \ln 1 = 0,$$



and it follows that the sequence is convergent towards the limit 0.

**2nd variant.** According to Taylor's formula,

$$\ln(1+t) = t + t\varepsilon(t).$$

We get by putting  $t = 1/n^2$ ,

$$a_n = \ln\left(1 + \frac{1}{n^2}\right) = \frac{1}{n^2} + \frac{1}{n^2}\varepsilon\left(\frac{1}{n}\right) \rightarrow 0 + 0 \cdot 0 = 0 \quad \text{for } n \rightarrow \infty,$$

hence the sequence is convergent and its limit is 0.  $\diamond$

**Example 1.7 .** Check if the sequence

$$a_n = \frac{(-1)^n}{n} + \frac{1 + (-1)^n}{2}$$

is convergent or divergent. Find the limit in case of convergence.

Due to the change of sign  $(-1)^n$  a good strategy would be to consider odd and even indices separately. Thus we shall consider the two subsequences,

$$a_{2n+1} = \frac{(-1)^{2n+1}}{2n+1} + \frac{1 + (-1)^{2n+1}}{2} = -\frac{1}{2n+1} \rightarrow 0 \quad \text{for } n \rightarrow \infty,$$

and

$$a_{2n} = \frac{(-1)^{2n}}{2n} + \frac{1 + (-1)^{2n}}{2} = \frac{1}{2n} + 1 \rightarrow 1 \quad \text{for } n \rightarrow \infty.$$

It follows that we have two different candidates of the limit, and since a limit is always unique, we conclude that it does not exist and the sequence is divergent.  $\diamond$

**Example 1.8 .** Check if the sequence

$$a_n = \frac{1}{n} \sin^5 n$$

is convergent or divergent. Find the limit if the sequence is convergent.

This example is trying to pull the reader's leg, because one is persuaded to concentrate on the mysterious term  $\sin^5 n$ , which apparently cannot be controlled.

Notice that we always have  $|\sin x| \leq 1$ , so

$$|a_n - 0| = |a_n| = \frac{1}{n} |\sin^5 n| \leq \frac{1}{n} \rightarrow 0 \quad \text{for } n \rightarrow \infty,$$

and we conclude that

$$|a_n - 0| \rightarrow 0 \quad \text{for } n \rightarrow \infty,$$

The sequence is convergent according to the definition and its limit is 0.  $\diamond$

**Example 1.9** . Check if the sequence

$$a_n = \sqrt{n+1} - \sqrt{n}$$

is convergent or divergent. Find its limit if it is convergent.

This example is of the type “ $\infty - \infty$ ”. It follows from

$$(a+b)(a-b) = a^2 - b^2,$$

that

$$a - b = \frac{a^2 - b^2}{a + b}.$$

Then putting  $a = \sqrt{n+1}$  and  $b = \sqrt{n}$  we find

$$\begin{aligned} a_n &= \sqrt{n+1} - \sqrt{n} = a - b = \frac{a^2 - b^2}{a + b} = \frac{(n+1) - n}{\sqrt{n+1} + \sqrt{n}} \\ &= \frac{1}{\sqrt{n+1} + \sqrt{n}} \rightarrow 0 \quad \text{for } n \rightarrow \infty, \end{aligned}$$

thus the sequence is convergent and its limit is 0.  $\diamond$

Please click the advert

The advertisement features a collage of four images. The top-left image shows a person sitting at a desk with multiple computer monitors, working in an office. The top-right image shows two women in professional attire; one is holding a laptop and they appear to be in a discussion. The bottom-left image shows a man in a dark suit holding a white document or folder. The bottom-right image shows a modern, multi-story building with many windows illuminated at night. The entire advertisement is set against a dark blue background with a light blue wavy graphic at the bottom. The Oticon logo is in the bottom right corner.

[www.job.oticon.dk](http://www.job.oticon.dk)

**oticon**  
PEOPLE FIRST

Download free books at [BookBooN.com](http://BookBooN.com)

**Example 1.10** . Check if the sequence

$$a_n = \left( \frac{2n-3}{3n+7} \right)^4$$

is convergent or divergent. Find its limit if it is convergent.

The function  $f(x) = x^4$  is continuous and independent of  $n$ , and the “inner part” converges,

$$\frac{2n-3}{3n+7} = \frac{2 - \frac{3}{n}}{3 + \frac{7}{n}} \rightarrow \frac{2-0}{3+0} = \frac{2}{3} \quad \text{for } n \rightarrow \infty.$$

In this case  $f$  and the limit can be interchanged, hence the sequence is convergent, and the limit is

$$\lim_{n \rightarrow \infty} a_n = f \left( \lim_{n \rightarrow \infty} \frac{2n-3}{3n+7} \right) = f \left( \frac{2}{3} \right) = \left( \frac{2}{3} \right)^4 = \frac{16}{81}.$$

In practice, the following shorter version is also accepted,

$$a_n = \left( \frac{2n-3}{3n+7} \right)^4 = \left( \frac{2 - \frac{3}{n}}{3 + \frac{7}{n}} \right)^4 \rightarrow \left( \frac{2}{3} \right)^4 = \frac{16}{81} \quad \text{for } n \rightarrow \infty,$$

which is correct, as long as the *exponent is a constant*, i.e. it does not depend on  $n$ .  $\diamond$

**Example 1.11** . Check if the sequence

$$a_n = \frac{n^{4/3} \cos(n!\pi/(\sqrt{2})^n)}{n+1}$$

is convergent or divergent. Find the limit in case of convergence.

We first rewrite  $a_n$  in the following way,

$$a_n = \frac{n^{4/3}}{n+1} \cos(n!\pi/(\sqrt{2})^n).$$

The first factor tends to  $\infty$ ,

$$\frac{n^{4/3}}{n+1} = \frac{\sqrt[3]{n}}{1 + \frac{1}{n}} \rightarrow \infty \quad \text{for } n \rightarrow \infty,$$

which, however, in general is not sufficient, because  $\cos x$  during the limit might lie close to 0, so we get the type of convergence “ $\infty \cdot 0$ ”.

Notice that if we only consider *even* indices, then we get rid of the square root. By the chance of parameter  $n \rightarrow 2n$  we get

$$\cos \left( \frac{(2n)!}{2^n} \pi \right) = \cos \left( \frac{1 \cdot 2 \cdot 3 \cdot 4 \cdots 2n}{1 \cdot 2 \cdot 1 \cdot 2 \cdots 2} \pi \right) = 1 \quad \text{for } n \geq 2,$$

because  $(2n)!/2^n$  is *even* for  $n \geq 2$ . This proves that we have for  $n \geq 2$ ,

$$a_{2n} = \frac{(2n)^{4/3}}{2n+1} \cos\left(\frac{(2n)!}{2^n} \pi\right) = \frac{(2n)^{4/3}}{2n+1} \rightarrow \infty \quad \text{for } n \rightarrow \infty,$$

and the sequence is divergent.  $\diamond$

**Example 1.12** . Check if the sequence

$$a_n = \cot \frac{1}{n} - n$$

is convergent or divergent. Find the limit in case of convergence

This is a tricky example, in which one must

- 1) replace  $1/n$  by  $x = 1/n$ , i.e.  $x \rightarrow 0+$  for  $n \rightarrow \infty$ ,
- 2) apply that  $\cot x = \cos x / \sin x$ , followed by putting everything on the same fraction line,
- 3) apply Taylor's formula in both the numerator and the denominator, followed by some reduction,
- 4) finally take the limit  $x \rightarrow 0+$ .

The details of this program look like the following:

$$\begin{aligned} a_n &= \cos \frac{1}{n} - n = \cot x - \frac{1}{x} = \frac{\cos x}{\sin x} - \frac{1}{x} = \frac{x \cos x - \sin x}{x \sin x} \\ &= \frac{x \left\{ 1 - \frac{1}{2}x^2 + x^2\varepsilon(x) \right\} - \left\{ x - \frac{1}{6}x^3 + x^3\varepsilon(x) \right\}}{x \{ x + x\varepsilon(x) \}} = \frac{x - \frac{1}{2}x^3 - x + \frac{1}{6}x^3 + x^3\varepsilon(x)}{x^2 \{ 1 + \varepsilon(x) \}} \\ &= -\frac{1}{3}x \cdot \frac{1 + \varepsilon(x)}{1 + \varepsilon(x)} \rightarrow -\frac{1}{3} \cdot 0 \cdot \frac{1+0}{1+0} = 0 \quad \text{for } x \rightarrow 0+. \end{aligned}$$

We conclude that the sequence is convergent with the limit 0.  $\diamond$

**Example 1.13** . Check if the given sequence is convergent or divergent. Find the limit in case of convergence.

$$a_n = \frac{3^n + (-2)^n}{3^{n+1} + (-2)^{n+1}}, \quad n \in \mathbb{N}.$$

When we estimate expressions consisting of two terms the trick is to put the numerically larger and dominating term outside the expression as a factor. We get by using this principle in both the numerator and the denominator that

$$a_n = \frac{3^n + (-2)^n}{3^{n+1} + (-2)^{n+1}} = \frac{3^n}{3^{n+1}} \cdot \frac{1 + \left(-\frac{2}{3}\right)^n}{1 + \left(-\frac{2}{3}\right)^{n+1}} = \frac{1}{3} \cdot \frac{1 + \left(-\frac{2}{3}\right)^n}{1 + \left(-\frac{2}{3}\right)^{n+1}}.$$

Now  $\left|-\frac{2}{3}\right| < 1$ , so  $\left(-\frac{2}{3}\right)^n \rightarrow 0$  and  $\left(-\frac{2}{3}\right)^{n+1} \rightarrow 0$  for  $n \rightarrow \infty$  (standard sequences), hence according to the rules of calculations,

$$a_n = \frac{1}{3} \cdot \frac{1 + \left(-\frac{2}{3}\right)^n}{1 + \left(-\frac{2}{3}\right)^{n+1}} \rightarrow \frac{1}{3} \cdot \frac{1+0}{1+0} = \frac{1}{3} \quad \text{for } n \rightarrow \infty.$$

The sequence is convergent and its limit is

$$\lim_{n \rightarrow \infty} a_n = \frac{1}{3}. \quad \diamond$$

**Example 1.14** . Check if the sequence

$$a_n = \frac{n(n+2)}{n+1} - \frac{n^3}{n^2+1}$$

is convergent or divergent. Find the limit in case of convergence.

The type of convergence is “ $\infty - \infty$ ”. We note that both terms behave approximately as  $n$ , so we subtract  $n$  from both terms:

$$\begin{aligned} a_n &= \frac{n(n+2)}{n+1} - \frac{n^3}{n^2+1} = \left\{ \frac{n(n+2)}{n+1} - n \right\} - \left\{ \frac{n^3}{n^2+1} - n \right\} = \frac{n^2+2n-n^2-n}{n+1} - \frac{n^3-n^3-n}{n^2+1} \\ &= \frac{n}{n+1} + \frac{n}{n^2+1} = 1 - \frac{1}{n+1} + \frac{1}{n + \frac{1}{n}} \rightarrow 1 - 0 + 0 = 1 \quad \text{for } n \rightarrow \infty. \end{aligned}$$

We see that the sequence is convergent with the limit 1.

A simpler variant is obtained if we immediately see that

$$\frac{n(n+2)}{n+1} = \frac{n^2+2n+1-1}{n+1} = n+1 - \frac{1}{n+1},$$

where we use that  $n^2+2n+1 = (n+1)^2$ .  $\diamond$

**Example 1.15** . Check if the sequence

$$a_n = \sqrt[3]{n^3+1} - n$$

is convergent or divergent. Find the limit in case of convergence.

The type is “ $\infty - \infty$ ”. In this case the trick  $a - b = (a^2 - b^2)/(a + b)$  does not work. However, we succeed by a small modification. First notice that the cubic is removed by taking the third power, i.e. we start by considering  $a^3 - b^3$  where  $a = \sqrt[3]{n^3+1}$  and  $b = n$ . Then

$$1 = (n^3+1) - n^3 = a^3 - b^3 = (a-b)(a^2+ab+b^2),$$

hence by a rearrangement,

$$a_n = \sqrt[3]{n^3+1} - n = a - b = \frac{a^3 - b^3}{a^2 + ab + b^2} = \frac{1}{(\sqrt[3]{n^3+1})^2 + n\sqrt[3]{n^3+1} + n^2} \rightarrow 0$$

for  $n \rightarrow \infty$ , and we see that the sequence is convergent with the limit 0.

**Alternatively** one applies Taylor's formula on  $\sqrt[3]{1+x}$ , i.e.

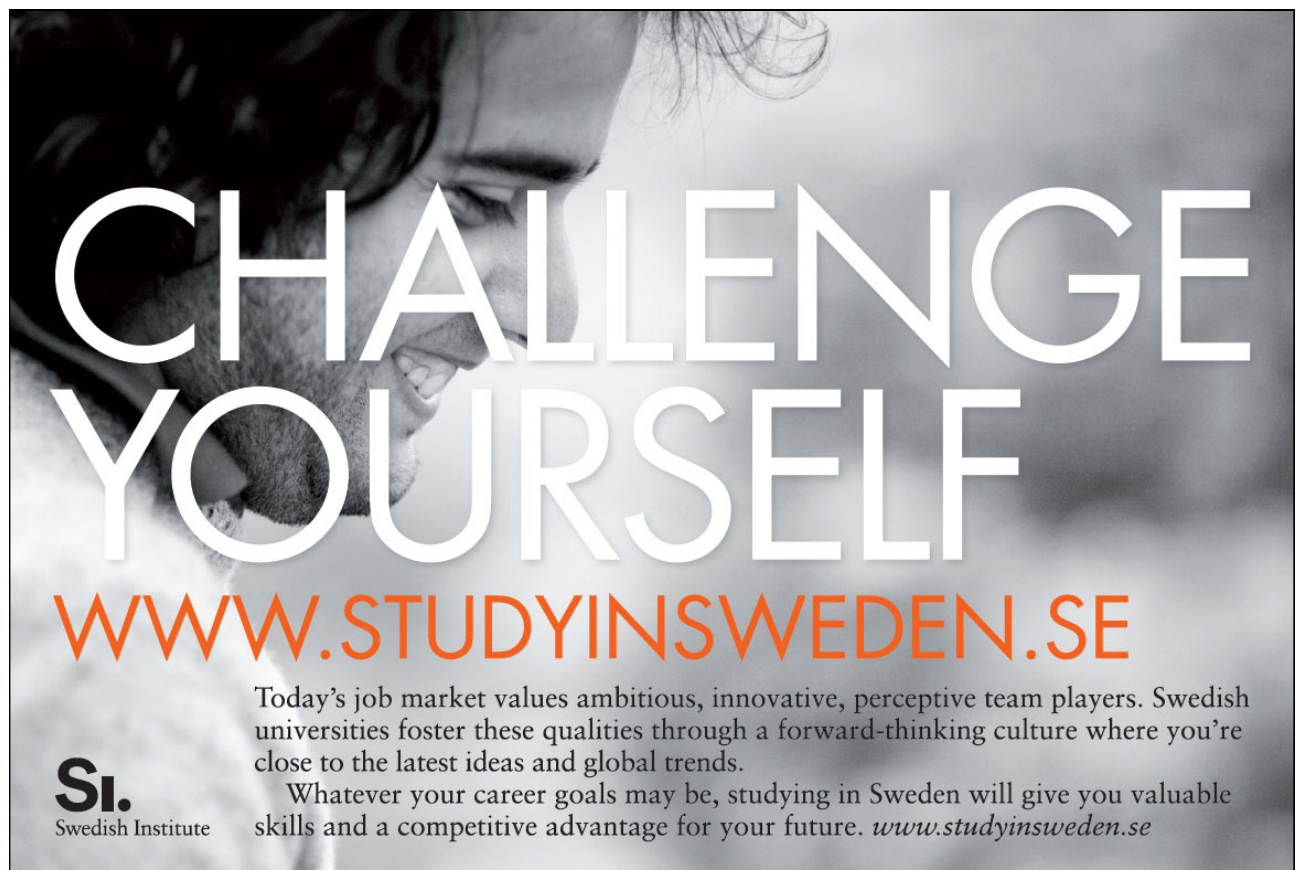
$$(1+x)^{1/3} = 1 + \binom{1/3}{1} x + x\varepsilon(x) = 1 + \frac{1}{3}x + x\varepsilon(x),$$

where  $\varepsilon(x) \rightarrow 0$  for  $x \rightarrow 0$ . By a small rearrangement, in which we put  $x = 1/n^3 \rightarrow 0$  for  $n \rightarrow \infty$  we get

$$\begin{aligned} a_n &= \sqrt[3]{n^3+1} - n = n\sqrt[3]{1+\frac{1}{n^3}} - n = n\left\{1 + \frac{1}{3}\frac{1}{n^3} + \frac{1}{n^3}\varepsilon\left(\frac{1}{n}\right)\right\} - n \\ &= \frac{1}{3}\frac{1}{n^2} + \frac{1}{n^2}\varepsilon\left(\frac{1}{n}\right) \rightarrow 0 \text{ for } n \rightarrow \infty, \end{aligned}$$

and the sequence is convergent with the limit 0.  $\diamond$

Please click the advert



**CHALLENGE YOURSELF**

**WWW.STUDYINSWEDEN.SE**

**Si.**  
Swedish Institute

Today's job market values ambitious, innovative, perceptive team players. Swedish universities foster these qualities through a forward-thinking culture where you're close to the latest ideas and global trends.

Whatever your career goals may be, studying in Sweden will give you valuable skills and a competitive advantage for your future. [www.studyinsweden.se](http://www.studyinsweden.se)

Download free books at BookBooN.com

**Example 1.16** . Check if the sequence

$$a_n = (2^n + 3^n)^{1/n}$$

is convergent or divergent. Find the limit in case of convergence.

The trick in case of expressions with several terms is always to put the dominating term as a factor. Here,  $3^n \gg 2^n$ , hence

$$(1) \quad a_n = (2^n + 3^n)^{1/n} = 3 \left\{ 1 + \left( \frac{2}{3} \right)^n \right\}^{1/n}$$

We get from  $1 < 1 + \left( \frac{2}{3} \right)^n < 2$ ,

$$3 < a_n = 3 \left\{ 1 + \left( \frac{2}{3} \right)^n \right\}^{1/n} < 3 \sqrt[n]{2} \rightarrow 3 \quad \text{for } n \rightarrow \infty.$$

Then all terms  $a_n$  lie between 3 and a sequence which converges towards 3, hence  $(a_n)$  is convergent with the limit 3.

In a **variant** we can instead take the logarithm of (1),

$$\ln a_n = \ln 3 + \frac{1}{n} \ln \left( 1 + \left( \frac{2}{3} \right)^n \right) \rightarrow \ln 3 + 0 \cdot 0 = \ln 3 \quad \text{for } n \rightarrow \infty,$$

which shows that  $(a_n)$  is convergent with the limit 3.  $\diamond$

**Example 1.17** Let  $(a_n)$  be some real sequence which is convergent with the limit  $a$ , and let the sequence  $(b_n)$  be given by

$$b_n = \left( 1 + \frac{a_n}{n} \right)^n, \quad n \in \mathbb{N}.$$

Prove that  $(b_n)$  is convergent and find its limit.

(Hint: One may apply Taylor's formula for  $\ln(1+x)$ .)

Taylor's formula for  $\ln(1+x)$  gives

$$\ln(1+x) = x - \frac{1}{2}x^2 + x^2\varepsilon(x).$$

Since  $a_n \rightarrow a$  for  $n \rightarrow \infty$ , there exists an  $N \in \mathbb{N}$ , such that

$$\left| \frac{a_n}{n} \right| < 1 \quad \text{for } n \geq N.$$

By putting  $x = a_n/n$  it follows from Taylor's formula for  $n \geq N$  that

$$\begin{aligned} \ln b_n &= n \ln \left( 1 + \frac{a_n}{n} \right) \\ &= n \left\{ \frac{a_n}{n} - \frac{a_n^2}{2n^2} + \frac{a_n^2}{n^2} \varepsilon \left( \frac{a_n}{n} \right) \right\} \\ &= a_n - \frac{1}{n} a_n^2 + \frac{1}{n} \frac{a_n^2}{n^2} \varepsilon \left( \frac{a_n}{n} \right) \\ &\rightarrow a - 0 + 0 = a \quad \text{for } n \rightarrow \infty. \end{aligned}$$

Since  $\exp$  is continuous, we finally conclude that

$$b_n = \exp(\ln b_n) \rightarrow \exp a = e^a \quad \text{for } n \rightarrow \infty,$$

and  $(b_n)$  is convergent with the limit  $e^a$ .  $\diamond$

Please click the advert

## Turning a challenge into a learning curve. Just another day at the office for a high performer.

### Accenture Boot Camp – your toughest test yet

Choose Accenture for a career where the variety of opportunities and challenges allows you to make a difference every day. A place where you can develop your potential and grow professionally, working alongside talented colleagues. The only place where you can learn from our unrivalled experience, while helping our global clients achieve high performance. If this is your idea of a typical working day, then Accenture is the place to be.

It all starts at Boot Camp. It's 48 hours that will stimulate your mind and enhance your career prospects. You'll spend time with other students, top Accenture Consultants and special guests. An inspirational two days

packed with intellectual challenges and activities designed to let you discover what it really means to be a high performer in business. We can't tell you everything about Boot Camp, but expect a fast-paced, exhilarating

and intense learning experience. It could be your toughest test yet, which is exactly what will make it your biggest opportunity.

Find out more and apply online.

Visit [accenture.com/bootcamp](https://www.accenture.com/bootcamp)

• Consulting • Technology • Outsourcing

  
*High performance. Delivered.*



## 2 Summable sequences

**Example 2.1** . Given a real sequence  $(a_n)$ . Define another sequence  $(b_n)$  by

$$b_n = \frac{1}{n} \{a_1 + \cdots + a_n\}, \quad n \in \mathbb{N}.$$

Prove that if  $(a_n)$  is convergent with the limit  $a$ , then  $(b_n)$  is also convergent with the limit  $a$ .  
Give an example of a divergent sequence  $(a_n)$ , for which the corresponding sequence  $(b_n)$  is convergent.

We say that a sequence  $(a_n)$  is *summable*, if its corresponding sequence  $(b_n)$  defined as above is convergent. We shall prove that if  $(a_n)$  is convergent, then  $(a_n)$  is also summable. Then we shall construct an example of a summable sequence  $(a_n)$ , which is not convergent. Hence, there are more summable sequences than convergent ones.

1) Assume that  $a_n \rightarrow a$  for  $n \rightarrow \infty$ . This means that one to every  $\varepsilon > 0$  can find some  $N = N(\varepsilon) \in \mathbb{N}$ , such that

$$(2) \quad |a - a_n| < \frac{\varepsilon}{2} \quad \text{for every } n \geq N(\varepsilon).$$

Then

$$|a - b_n| = \left| a - \frac{1}{n}(a_1 + \cdots + a_n) \right| = \frac{1}{n} |(a - a_1) + (a - a_1) + \cdots + (a - a_n)| \leq \frac{1}{n} \sum_{k=1}^n |a - a_k|.$$

If  $n > N(\varepsilon)$ , we split the sum in the following way

$$\begin{aligned} |a - b_n| &\leq \frac{1}{n} \sum_{k=1}^{N(\varepsilon)} |a - a_k| + \frac{1}{n} \sum_{k=N(\varepsilon)+1}^n |a - a_k| \leq \frac{1}{n} \sum_{k=1}^{N(\varepsilon)} |a - a_k| + \frac{n - N(\varepsilon)}{n} \cdot \frac{\varepsilon}{2} \\ &\leq \frac{1}{n} \sum_{k=1}^{N(\varepsilon)} |a - a_k| + \frac{\varepsilon}{2}, \end{aligned}$$

since the  $n - N(\varepsilon)$  terms of the latter sum are all  $< \varepsilon/2$  by (2).

Since  $N(\varepsilon)$  is fixed (corresponding to the given  $\varepsilon > 0$ ), the sum is

$$\sum_{k=1}^{N(\varepsilon)} |a - a_k|$$

i.e. a constant, which is independent of  $n$ . Thus, there exists an  $N_1 \geq N(\varepsilon)$ , such that

$$\frac{1}{n} \sum_{k=1}^{N(\varepsilon)} |a - a_k| < \frac{\varepsilon}{2} \quad \text{for every } n \geq N_1.$$

As a conclusion we get that we to every  $\varepsilon > 0$  can find an  $N_1 \in \mathbb{N}$ , such that

$$|a - b_n| \leq \frac{1}{n} \sum_{k=1}^{N(\varepsilon)} |a - a_k| + \frac{\varepsilon}{2} < \frac{\varepsilon}{2} + \frac{\varepsilon}{2} = \varepsilon \quad \text{for every } n \geq N_1.$$

This is precisely the definition of  $b_n \rightarrow a$  for  $n \rightarrow \infty$ .

2) The classical example of a divergent sequence  $(a_n)$ , for which  $(b_n)$  is convergent, is

$$a_n = (-1)^{n-1}, \quad \text{where } b_{2n-1} = \frac{1}{2n-1} \text{ og } b_{2n} = 0.$$

Clearly,  $b_n \rightarrow 0$  for  $n \rightarrow \infty$ .

A slightly more “wild” example is

$$a_{2n-1} = \sqrt{n} \quad \text{and} \quad a_{2n} = -\sqrt{n}.$$

In this case,

$$b_{2n-1} = \frac{\sqrt{n}}{2n-1} \quad \text{og} \quad b_{2n} = 0,$$

thus  $b_n \rightarrow 0$  for  $n \rightarrow \infty$ .

**Remark 2.1** . It follows from

$$nb_n = a_1 + a_2 + \cdots + a_n,$$

that  $b_1 = a_1$  and

$$a_n = nb_n - (n-1)b_{n-1} \quad \text{for } n \geq 2.$$

**Example 2.2** We define for a real sequence  $(a_n)$  another sequence  $(b_n)$  by

$$b_n = \frac{1}{n} \{a_1 + \cdots + a_n\}, \quad n \in \mathbb{N}.$$

Prove that if  $a_n \rightarrow \infty$  for  $n \rightarrow \infty$ , then  $b_n \rightarrow \infty$  for  $n \rightarrow \infty$ .

Give an example of a sequence  $(a_n)$  which does not tend towards  $\infty$  for  $n$  tending towards  $\infty$ , for which the corresponding sequence  $(b_n)$  fulfils  $b_n \rightarrow \infty$  for  $n \rightarrow \infty$ .

First note that if  $|a_n| \leq c$ , then also  $|b_n| \leq c$ . It follows that if  $b_n \rightarrow \infty$ , then  $(a_n)$  must be unbounded.

Assume that  $a_n \rightarrow \infty$  for  $n \rightarrow \infty$ . This means that we to every  $c > 0$  can find an  $N = N(c) \in \mathbb{N}$ , such that (e.g.)

$$a_n > 3c \quad \text{for every } n \geq N(c).$$

If so, we have for  $n > N(c)$  that

$$b_n = \frac{1}{n} \sum_{k=1}^{N(c)} a_k + \frac{1}{n} \sum_{k=N(c)+1}^n a_k > \frac{1}{n} \sum_{k=1}^{N(c)} a_k + \frac{n - N(c)}{n} \cdot 3c.$$

To avoid that the finite sum is negative we choose  $N_1 > 3N(c)$ , such that

$$\left| \frac{1}{n} \sum_{k=1}^{N(c)} a_k \right| < c \quad \left[ \text{and trivially } \frac{3N(c)}{n} < 1 \right] \quad \text{for } n \geq N_1.$$

Then for every  $n \geq N_1$ ,

$$b_n > \frac{1}{n} \sum_{k=1}^{N(c)} a_k + \frac{n - N(c)}{n} \cdot 3c > -c + 3c - c = c.$$

Since for every  $c > 0$  we can choose  $N_1$ , such that

$$b_n > c \quad \text{for every } n \geq N_1,$$

we conclude that  $b_n \rightarrow \infty$  for  $n \rightarrow \infty$ .

By the introducing remark,  $b_n \rightarrow \infty$  implies that  $(a_n)$  is unbounded. We note that an unbounded sequence does not necessarily tend towards  $\infty$ . Choose e.g.

$$a_{2n} = 2n \quad \text{and} \quad a_{2n-1} = 0.$$

Then  $(a_n)$  is unbounded, and it does not tend towards  $\infty$ . We note that  $b_1 = 0$  and

$$b_{2n} = \frac{1}{2n} (2 + 4 + \cdots + 2n) = \frac{1}{n} (1 + 2 + \cdots + n) = \frac{1}{n} \cdot \frac{n(n+1)}{2} = \frac{n+1}{2} \rightarrow \infty,$$

and

$$b_{2n+1} = \frac{1}{2n+1} (2 + 4 + \cdots + 2n) = \frac{n(n+1)}{2n+1} \rightarrow \infty,$$

thus.  $b_n \rightarrow \infty$ .

We have here used that

$$(3) \quad 1 + 2 + \cdots + n = \frac{1}{2} n(n+1), \quad n \in \mathbb{N}.$$

For completeness, we see that this is true for  $n = 1, 2, 3$ . If (3) holds for some  $n \in \mathbb{N}$ , then we get for the following term by using (3) that

$$1 + 2 + \cdots + n + (n+1) = \frac{1}{2} n(n+1) + (n+1) = \frac{1}{2} (n+1)(n+2),$$

which we recognize as (3) where  $n$  has been replaced by  $n+1$ . Then (3) follows in general by induction (the *boot strap principle*), because if (3) holds for some  $n$ , then it also holds for the following term, etc.. Since (3) is true for  $n = 1$  (in the beginning), we see that (3) is true for all  $n \in \mathbb{N}$ .  $\diamond$

### 3 Recursively given sequences

**Example 3.1** Let the sequence  $(a_n)$  be recursively given by

$$a_1 = \frac{1}{\sqrt{2}}, \quad a_{n+1} = \sqrt{a_n + \frac{1}{2}}, \quad n \in \mathbb{N}.$$

Prove that  $(a_n)$  is convergent and find the limit.

We shall first find the *possible* limit.

Assume that the sequence is convergent,  $a_n \rightarrow a$  for  $n \rightarrow \infty$ . Since taking the square root of nonnegative numbers is a continuous function, we get by taking the limit in

$$a_{n+1} = \sqrt{a_n + \frac{1}{2}} > 0,$$

that

$$a = \sqrt{a + \frac{1}{2}} \geq 0, \quad \text{i.e.} \quad a^2 = a + \frac{1}{2} \text{ where } a \geq 0.$$

This equation of degree two has the roots  $a = (1 \pm \sqrt{3})/2$ . Since  $a > 0$ , the only *possible* limit is

$$a = \frac{1 + \sqrt{3}}{2}.$$

Please click the advert





it's an **interesting** world

## Get under the skin of it.

**Graduate opportunities**  
Cheltenham | £24,945 + benefits

One of the UK's intelligence services, GCHQ's role is two-fold: to gather and analyse intelligence which helps shape Britain's response to global events, and, to provide technical advice for the protection of Government communication and information systems. In doing so, our specialists – in IT, internet, engineering, languages, information assurance, mathematics and intelligence – get well beneath the surface of global affairs. If you thought the world was an interesting place, you really ought to explore our world of work.

[www.careersinbritishintelligence.co.uk](http://www.careersinbritishintelligence.co.uk)

Applicants must be British citizens. GCHQ values diversity and welcomes applicants from all sections of the community. We want our workforce to reflect the diversity of our work.








It does not yet follow that the sequence actually *is* convergent. We continue in the following way.

A sequence  $(a_n)$  is convergent, if it is (weakly) increasing and bounded from above.

1) **The sequence is bounded from above.**

Obviously,  $a_1 = 1/\sqrt{2} < (1 + \sqrt{3})/2$  [the possible limit]

If  $a_n < (1 + \sqrt{3})/2$ , then it follows for the next element that also

$$a_{n+1} = \sqrt{a_n + \frac{1}{2}} < \sqrt{1 + \frac{\sqrt{3}}{2}} = \frac{1 + \sqrt{3}}{2},$$

where we have used that

$$\left(\frac{1 + \sqrt{3}}{2}\right)^2 = \frac{1}{4} \{1 + 3 + 2\sqrt{3}\} = 1 + \frac{\sqrt{3}}{2}.$$

Then it follows by induction that  $(a_n)$  is bounded from above.

**Alternatively** it follows from the assumption  $a_n < 3/2$  that

$$a_{n+1} = \sqrt{a_n + \frac{1}{2}} < \sqrt{\frac{3}{2} + \frac{1}{2}} = \sqrt{2} < \frac{3}{2},$$

hence by induction,  $a_n < 3/2$ , and it is bounded from above.

2) **The sequence is increasing.**

Firstly,

$$a_2 = \sqrt{\frac{1}{\sqrt{2}} + \frac{1}{2}} > \sqrt{\frac{1}{2}} = \frac{1}{\sqrt{2}} = a_1, \quad \text{i.e. } a_2 > a_1.$$

Then assume that  $a_n > a_{n-1}$  for some  $n \geq 2$ . (This is at least true for  $n = 2$ ). Then

$$a_{n+1} - a_n = \sqrt{a_n + \frac{1}{2}} - \sqrt{a_{n-1} + \frac{1}{2}} = \frac{a_n - a_{n-1}}{\sqrt{a_n + \frac{1}{2}} + \sqrt{a_{n-1} + \frac{1}{2}}} > 0,$$

and it follows by induction that  $(a_n)$  is increasing.

3) We have now proved that  $(a_n)$  is convergent.

We showed in the beginning that  $a = (1 + \sqrt{3})/2$  is the only *possible* limit

Since the limit exists, we must have the limit  $a = (1 + \sqrt{3})/2$ .  $\diamond$

**Example 3.2** . Let the sequence  $(a_n)$  be recursively given by

$$a_1 = 1, \quad a_{n+1} = \sqrt{3a_n}, \quad n \in \mathbb{N}.$$

Prove that  $(a_n)$  is convergent, and find its limit.

If  $a_n \rightarrow a$  for  $n \rightarrow \infty$ , it follows by taking the limit in the recursion formula,

$$a = \sqrt{3a}, \quad \text{or } a^2 = 3a \text{ by a squaring.}$$

We use here that taking the square root is a continuous operation, so the limit and the square root can be interchanged. Thus we conclude that  $a = 0$  and  $a = 3$  are the only *possible* limits. We shall prove that the sequence indeed *is* convergent. (Our assumption above).

1) **The sequence is bounded.**

If  $a \geq 1$ , then  $a_{n+1} \geq \sqrt{3} \geq 1$ , i.e.  $(a_n)$  is bounded from below. It follows in particular that if the limit  $a$  exists, then we must have  $a \neq 0$ , thus  $a = 3$  is the only possible limit.

If  $a_n < 3$ , then  $a_{n+1} = \sqrt{3a_n} < \sqrt{3 \cdot 3} = 3$ , and  $(a_n)$  is also bounded from above.

2) **The sequence is increasing.**

In fact,

$$a_{n+1} - a_n = \sqrt{3a_n} - \sqrt{3a_{n-1}} = \sqrt{3} \cdot \{\sqrt{a_n} - \sqrt{a_{n-1}}\}$$

shows that if  $a_n > a_{n-1} \geq 1$ , then also  $\sqrt{a_n} > \sqrt{a_{n-1}}$ , hence  $a_{n+1} - a_n > 0$ , and we have  $a_{n+1} > a_n$ .

From  $a_2 = \sqrt{3} > 1 = a_1$  follows that  $a_2 > a_1$ . Then by induction,

$$1 = a_1 < a_2 < \dots < a_n < a_{n+1} < \dots$$

3) **Conclusion.**

An increasing bounded sequence  $(a_n)$  is convergent, so the given sequence is convergent. The only possible limits were  $a = 0$  and  $a = 3$ . But since all  $a_n \geq 1$ , we can exclude  $a = 0$ , and

$$\lim_{n \rightarrow \infty} a_n = 3. \quad \diamond$$

**Example 3.3** Define the sequence  $(a_n)$  by

$$a_1 = k, \quad a_{n+1} = \frac{1}{2} \left( a_n + \frac{p}{a_n} \right), \quad n \in \mathbb{N},$$

where  $k > 0$  and  $p > 0$  are any positive numbers. Prove that  $a_n^2 \geq p$  for every  $n \geq 2$  and that the sequence  $a_2, a_3, a_4, \dots$ , is weakly decreasing. Then prove that  $(a_n)$  is convergent with the limit  $\sqrt{p}$ . Calculate  $a_3$  with 4 decimals in the case  $k = 2, p = 3$ , and compare the result with the value on the pocket calculator of  $\sqrt{3}$ . Finally, describe the connection between the sequence and Newton's iteration method of solution of the equation  $x^2 - p = 0$ .

1) **Proof of  $a_n^2 \geq p$  for every  $n \geq 2$ .**

If we put  $f(t) = \frac{1}{2} \left( t + \frac{p}{t} \right)$ ,  $t > 0$ , then

$$a_{n+1} = f(a_n) \geq \min_{t>0} f(t) \quad \text{for } n \geq 1.$$

Since

$$f'(t) = \frac{1}{2} \left( 1 - \frac{p}{t^2} \right) = 0 \quad \text{for } t = \sqrt{p} > 0,$$

and  $f(t) \rightarrow \infty$  for  $t \rightarrow 0+$  and for  $t \rightarrow \infty$ , we must have that  $t = \sqrt{p}$  corresponds to a minimum, hence

$$a_{n+1} \geq f(\sqrt{p}) = \frac{1}{2} \left( \sqrt{p} + \frac{p}{\sqrt{p}} \right) = \sqrt{p} \quad \text{for } n \geq 1,$$

and  $a_n \geq \sqrt{p}$ , and thus  $a_n^2 \geq p$  for all  $n \geq 2$ .

2) **Proof of the claim that  $(a_n)$  is weakly decreasing for  $n \geq 2$ .**

We first prove that  $a_2 \geq a_3$ . This follows from

$$\begin{aligned} a_2 - a_3 &= \frac{1}{2} \left( a_1 + \frac{p}{a_1} \right) - \frac{1}{2} \left( a_2 + \frac{p}{a_2} \right) = \frac{1}{2} (a_1 - a_2) + \frac{p}{2} \left( \frac{1}{a_1} - \frac{1}{a_2} \right) = \frac{a_1 - a_2}{2a_2} \left\{ a_2 - \frac{p}{a_1} \right\} \\ &= \frac{1}{2a_2} \frac{1}{2} \left( k - \frac{p}{k} \right) \frac{1}{2} \left( k - \frac{p}{k} \right) = \frac{1}{8a_2} \left( k - \frac{p}{k} \right)^2 \geq 0. \end{aligned}$$

Then assume that  $a_{n-1} \geq a_n$ , i.e.  $a_{n-1} - a_n \geq 0$  for  $n \geq 3$ . This is true for  $n = 3$ , according to our first result. then

$$\begin{aligned} a_n - a_{n+1} &= \frac{1}{2} \left( a_{n-1} + \frac{p}{a_{n-1}} \right) - \frac{1}{2} \left( a_n + \frac{p}{a_n} \right) = \frac{1}{2} (a_{n-1} - a_n) - \frac{p}{2} \left( \frac{1}{a_n} - \frac{1}{a_{n-1}} \right) \\ &= \frac{1}{2} (a_{n-1} - a_n) \cdot \frac{a_n a_{n-1} - p}{a_n a_{n-1}}. \end{aligned}$$

By 1. we have  $a_n \geq \sqrt{p}$  and  $\sqrt{a_{n-1}} \geq \sqrt{p}$ , so  $a_n a_{n-1} - p \geq 0$ .

By the induction assumption we get  $a_{n-1} - a_n \geq 0$ .

We see that we also have  $a_n - a_{n+1} \geq 0$ , hence  $a_n \geq a_{n+1}$ .

Then by induction, at  $a_{n-1} \geq a_n$  for all  $n \geq 2$ , and the sequence is weakly decreasing.

- 3) Since  $(a_n)$  is bounded from below and weakly decreasing, it is convergent.
- 4) The function  $f(t) = \frac{1}{2} \left( t + \frac{p}{t} \right)$  is continuous, hence we can find the **limit value** by taking the limit in the recursion formula, i.e. replace  $a_{n+1}$  and  $a_n$  by the limit value  $a$ . We get the equation

$$a = \frac{1}{2} \left( a + \frac{p}{a} \right), \quad \text{i.e.} \quad a^2 = p \text{ ved omordning.}$$

Since every  $a_n \geq \sqrt{p}$ , we have  $a \geq \sqrt{p}$ , it is in particular positive. It therefore follows that  $a = \sqrt{p}$ .

- 5) When  $k = 2$  and  $p = 3$ , we get

$$a_1 = 2 \quad \text{og} \quad a_{n+1} = \frac{1}{2} \left( a_n + \frac{3}{a_n} \right).$$

Hence

$$a_2 = 1,750000, \quad a_3 = 1,732143, \quad a_4 = 1,732051.$$

By a comparison with the value on a pocket calculator we see that  $a_3$  agrees on the first 3 decimals with  $\sqrt{3}$  and  $a_4$  agrees on the first 6 decimals with  $\sqrt{3}$ .

Please click the advert



**Brain power**

By 2020, wind could provide one-tenth of our planet's electricity needs. Already today, SKF's innovative know-how is crucial to running a large proportion of the world's wind turbines.

Up to 25 % of the generating costs relate to maintenance. These can be reduced dramatically thanks to our systems for on-line condition monitoring and automatic lubrication. We help make it more economical to create cleaner, cheaper energy out of thin air.

By sharing our experience, expertise, and creativity, industries can boost performance beyond expectations. Therefore we need the best employees who can meet this challenge!

**The Power of Knowledge Engineering**

Plug into The Power of Knowledge Engineering.  
Visit us at [www.skf.com/knowledge](http://www.skf.com/knowledge)

**SKF**

Download free books at [BookBooN.com](http://BookBooN.com)



6) **Comparison with the Newton-Raphson iteration method.**

Let  $F(x) = x^2 - p$ , then  $F'(x) = 2x$ , hence

$$g(x) = x - \frac{F(x)}{F'(x)} = x - \frac{x^2 - p}{2x} = \frac{1}{2} \left( x + \frac{p}{x} \right).$$

The iteration formula becomes

$$a_{n+1} = \frac{1}{2} \left( a_n + \frac{p}{a_n} \right),$$

which is precisely the considered recursive sequence.  $\diamond$

**Example 3.4** Let the sequence  $(a_n)$  be given by  $a_1 = 0$ ,  $a_2 = 1$ , and each of the following terms as the arithmetical mean of the two preceding terms:

$$a_3 = \frac{1}{2}, \quad a_4 = \frac{3}{4}, \quad a_5 = \frac{5}{8}, \dots, a_n = \frac{1}{2} \{a_{n-1} + a_{n-2}\}, \dots$$

Prove by induction that

$$a_n = \frac{2}{3} \cdot \frac{(-1)^{n-2}}{2^{n-1}} + \frac{2}{3}.$$

Then prove that the sequence  $(a_n)$  is convergent with the limit  $2/3$ .

For  $n = 1$  we get  $\frac{2}{3} \cdot \frac{(-1)^{n-2}}{2^{n-1}} + \frac{2}{3} = -\frac{2}{3} + \frac{2}{3} = 0 = a_1$ .

For  $n = 2$  we get  $\frac{2}{3} \cdot \frac{(-1)^{n-2}}{2^{n-1}} + \frac{2}{3} = \frac{1}{3} + \frac{2}{3} = 1 = a_2$ .

For  $n = 3$  we get  $\frac{2}{3} \cdot \frac{(-1)^{n-2}}{2^{n-1}} + \frac{2}{3} = -\frac{1}{6} + \frac{2}{3} = \frac{1}{2} = a_3$ .

Assume that

$$a_{n-2} = \frac{2}{3} \cdot \frac{(-1)^n}{2^{n-3}} + \frac{2}{3} \quad \text{og} \quad a_{n-1} = \frac{2}{3} \cdot \frac{(-1)^{n-1}}{2^{n-2}} + \frac{2}{3}$$

for some  $n \geq 3$ . This is at least true for  $n = 3$  and  $n = 4$ . Then by an addition,

$$a_n = \frac{1}{2}(a_{n-1} + a_{n-2}) = \frac{2}{3} + \frac{2}{3} \cdot \frac{1}{2} \left\{ \frac{(-1)^n}{2^{n-3}} + \frac{(-1)^{n-1}}{2^{n-2}} \right\} = \frac{2}{3} + \frac{2}{3} \cdot \frac{(-1)^n}{2^{n-1}},$$

which has the same structure, and the formula follows by induction.

Since

$$\left| a_n - \frac{2}{3} \right| = \frac{2}{3} \cdot \frac{1}{2^{n-1}} = \frac{4}{3} \cdot \frac{1}{2^n} \rightarrow 0 \quad \text{for } n \rightarrow \infty,$$

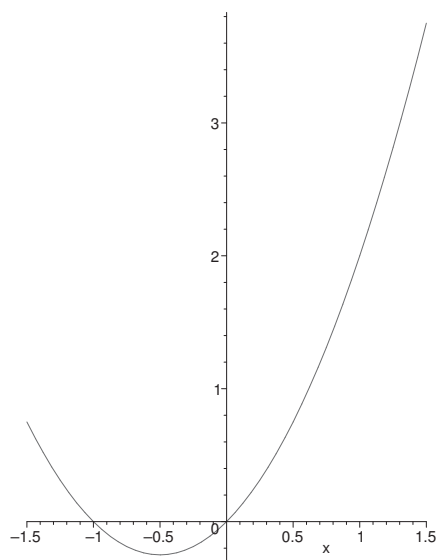
it follows by the definition that  $a_n \rightarrow \frac{2}{3}$ .

**Example 3.5** Consider the recursively given sequence  $(a_n)$ , where  $a_1 = c \in \mathbb{R}$ ,  $a_{n+1} = f(a_n)$  for  $f(x) = x + x^2$ . The function  $f$  has the fix point  $x_0 = 0$ . Show graphically that the fix point is attractive for some values of  $c < 0$ , and repelling for every  $c > 0$ .

It follows from the equation  $f(x_0) = x_0$ , i.e.  $x_0^2 = 0$ , that  $x_0 = 0$ , hence  $x_0 = 0$  is a fix point. Since

$$f(x) = x^2 + x = \left(x + \frac{1}{2}\right) - \frac{1}{4},$$

it is easy to sketch the graph.



It is difficult to sketch on the figure in MAPLE the lines which shows the convergence, so this is left to the reader. We see that  $x_0$  is attractive for  $c \in [-1, 0]$  and repelling for  $c \in \mathbb{R} \setminus [-1, 0]$

We shall now prove these claims.

- 1) If  $c > 0$ , then  $f(c) = c^2 + c > c$ , and  $f(c)$  moves away from  $x_0 = 0$ , thus the point is repelling.
- 2) If  $c < -1$ , then  $f(c) = c^2 + c = |c|(|c| - 1) > 0$ , and we are back in case 1..
- 3) If either  $c = 0$  or  $c = -1$ , then  $f(c) = 0$ . Since trivially  $f(0) = 0$  in all the following iterations, it follows that  $x_0 = 0$  is attractive for these values of  $c$ .
- 4) Finally, if  $-1 < c < 0$ , then  $f(c) = c + c^2 = c(1 + c) < 0$ , and  $f(c) > c$ , hence

$$c < f(c) < 0,$$

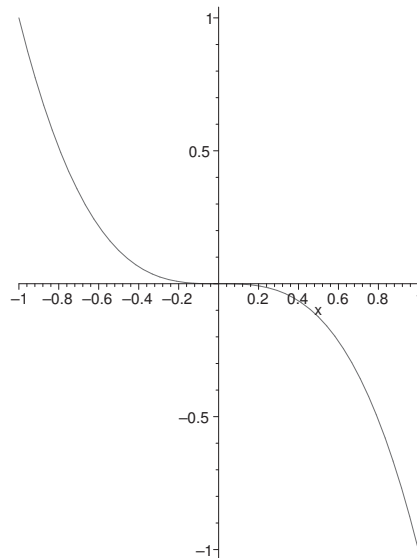
and we conclude that the fix point is attractive for  $c \in ]-1, 0[$ .  $\diamond$

**Example 3.6** Consider the recursively given sequence  $(a_n)$  where

$$a_1 = c, \quad a_{n+1} = -a_n^3.$$

- 1) Compute for  $c = -1$  the terms  $a_2, \dots, a_5$ , and give a graphical description.
- 2) The same for  $c = -1/2$ .

Again, it is difficult to give all necessary details on a figure in MAPLE-figure, so these additions are left to the reader.



- 1) If  $c = -1$ , then

$$a_1 = -1, \quad a_2 = 1, \quad a_3 = -1, \quad a_4 = 1, \quad a_5 = -1,$$

and in general  $a_n = (-1)^n$ .

- 2) If  $c = -1/2$ , then

$$a_1 = -\frac{1}{2}, \quad a_2 = \frac{1}{23}, \quad a_3 = -\frac{1}{29}, \quad a_4 = \frac{1}{227}, \quad a_5 = -\frac{1}{281},$$

and in general

$$a_n = (-1)^n 2^{-(3^n - 1)}, \quad n \in \mathbb{N}. \quad \diamond$$

**Example 3.7** Let the sequence  $(a_n)$  be recursively given by

$$a_1 = 100, \quad a_{n+1} = 2\sqrt{a_n} - 1.$$

- 1) Prove by induction that  $a_n > 1$  for every  $n \in \mathbb{N}$ .
- 2) Prove by induction that the sequence  $(a_n)$  is decreasing.
- 3) Finally, prove that the sequence  $(a_n)$  is convergent, and find its limit value.

1) Assume that  $a_n > 1$ . Then  $a_{n+1} = 2\sqrt{a_n} - 1 > 2 \cdot 1 - 1 = 1$ , and we see that  $a_n > 1$  implies that also the successor satisfies  $a_{n+1} > 1$ . Since  $a_1 = 100 > 1$ , the claim follows by induction, hence  $(a_n)$  is bounded from below.

2) We get by insertion,  $a_2 = 2\sqrt{100} - 1 = 19 < 100 = a_1$ , thus  $a_2 < a_1$ .

Assume that  $a_{n-1} > a_n$  (this is true for  $n = 2$ ). When  $n$  is replaced by  $n + 1$ , we get

$$a_n - a_{n+1} = (2\sqrt{a_{n-1}} - 1) - (2\sqrt{a_n} - 1) = 2(\sqrt{a_{n-1}} - \sqrt{a_n}) > 0,$$

hence  $a_n > a_{n+1}$ . We conclude by induction that

$$a_1 > a_2 > a_3 > \cdots > a_{n-1} > a_n > a_{n+1} > \cdots \geq 1.$$

## Trust and responsibility

NNE and Pharmaplan have joined forces to create NNE Pharmaplan, the world's leading engineering and consultancy company focused entirely on the pharma and biotech industries.

Inés Aréizaga Esteva (Spain), 25 years old  
Education: Chemical Engineer

– You have to be proactive and open-minded as a newcomer and make it clear to your colleagues what you are able to cope. The pharmaceutical field is new to me. But busy as they are, most of my colleagues find the time to teach me, and they also trust me. Even though it was a bit hard at first, I can feel over time that I am beginning to be taken seriously and that my contribution is appreciated.

Please click the advert



NNE Pharmaplan is the world's leading engineering and consultancy company focused entirely on the pharma and biotech industries. We employ more than 1500 people worldwide and offer global reach and local knowledge along with our all-encompassing list of services.  
[nnepharmaplan.com](http://nnepharmaplan.com)

nne pharmaplan®

- 3) Since  $(a_n)$  is decreasing and bounded from below, it follows that  $(a_n)$  is convergent. Denote the limit value by  $a$ . By taking the limit of the recursion formula we get

$$0 = \lim_{n \rightarrow \infty} a_{n+1} - \lim_{n \rightarrow \infty} 2\sqrt{a_n} + 1 = a - 2\sqrt{a} + 1 = (\sqrt{a} - 1)^2,$$

hence  $\sqrt{a} = 1$ , and thus  $\lim_{n \rightarrow \infty} a_n = a = 1$ .

**Remark 3.1** If we consider the function  $f(x) = 2\sqrt{x} - 1$ , where  $f'(x) = \frac{1}{\sqrt{x}}$ , then  $f'(x_0) = f'(1) = 1$ , corresponding to a limiting case, in which one usually can say nothing about the convergence. This is also demonstrated by an iteration on a pocket calculator, because the approximation becomes slower the closer one is to  $a = 1$ ,

$$a_5 = 3,26904, \quad a_{10} = 1,69909, \quad a_{15} = 1,39299, \quad a_{20} = 1,26997. \quad \diamond$$

**Example 3.8** Find the smallest positive solution of the equation

$$\cos x = \frac{1}{1 + 25 \cdot 10^{-6} / \sin x}$$

with four decimals by using a convenient iteration method. Then comment on the convergence.

**Remark 3.2** This is a very vicious example!  $\diamond$

The difficulty of this example apparently stems from the denominator on the right hand side. First we rewrite in the following way

$$(4) \quad \cos x = \frac{1}{1 + 25 \cdot 10^{-6} / \sin x} = \frac{40000 \sin x}{40000 \sin x + 1} = 1 - \frac{1}{40000 \sin x + 1}.$$

It is easily seen that  $x > 0$  must be small, hence by Taylor's formula

$$\sin x \approx x \quad \text{og} \quad \cos x \approx 1 - \frac{x^2}{2},$$

and (4) can approximatively be written

$$1 - \frac{x^2}{2} \approx 1 - \frac{1}{40000x + 1}, \quad \text{i.e.} \quad x^2(40000x + 1) \approx 2.$$

We must in particular have  $40000x \gg 1$ , thus we have in the first iteration (the starting value)

$$x \approx 1/\sqrt[3]{20000} \approx 0,03684.$$

Then the method is reduced to the well-known *regula falsi*, i.e. insert

$$x_1 = 0,03683, \quad x_2 = 0,03684, \quad x_3 = 0,03685$$

into (4) and compare,

$n$	$x_n$	$\cos x_n$	$1 - \frac{1}{40000 \sin x + 1}$	Left side relation right side
1	0,03683	0,999321852	0,999321513	>
2	0,03684	0,999321484	0,999321697	<
3	0,03685	0,999321116	0,999321881	<

We are just inside the range of the accuracy of the pocket calculator, because the factor 40000 gives an error of rounding off which is 40000 times bigger than usual (i.e. 40000 times  $10^{-12}$ ).

It is quite ironical that our first approximation by using Taylor's formula in fact gives the best approximation with four decimals,

$$x \approx 0,03684,$$

which should be compared the the interpolation of the table,

$$x \approx 0,036836.$$

If we instead apply the Newton-Raphson iteration on

$$F(x) = \cos x + \frac{1}{40000 \sin x + 1} - 1$$

where

$$F'(x) = -\sin x - \frac{\cos x}{(40000 \sin x + 1)^2}$$

we get the auxiliary function

$$g(x) = x - \frac{F(x)}{F'(x)} = x + \frac{\cos x - 1 + \frac{1}{40000 \sin x + 1}}{\sin x + \frac{\cos x}{(40000 \sin x + 1)^2}}.$$

Even if we choose the value  $x_0 = 0,037$  as our start [where we have an eye to the value 0,03684] the iteration is extremely slow,

$$x_1 = 0,036991, \quad x_2 = 0,036982, \quad x_3 = 0,036974.$$

If we instead rewrite (4) to

$$40000 \cos x \cdot \sin x + \cos x = 40000 \sin x,$$

i.e. to

$$F(x) = 20000 \sin 2x - 40000 \sin x + \cos x = 0,$$

then

$$F'(x) = 40000 \cos 2x - 40000 \cos x - \sin x,$$

and we get by the Newton-Raphson iteration

$$x_{n+1} = x_n - \frac{20000 \sin 2x_n - 40000 \sin x_n + \cos x_n}{40000 \cos 2x_n - 40000 \cos x_n - \sin x_n}$$

with starting value  $x_0 = 0,037$ , the first values

$$x_1 = 0,036837, \quad x_2 = 0,036836, \quad x_3 = 0,036836.$$

**Example 3.9** Given the function

$$F(x) = \cos x + \frac{1}{\cosh x}.$$

- 1) Write down the Newton-Raphson iteration formula for the solution of the equation  $F(x) = 0$ .
- 2) Apply a programmable pocket calculator to the Newton-Raphson iteration and find the first four positive zeros of  $F(x) = 0$  by choosing the starting values

$$x_0^{(1)} = \frac{\pi}{2}, \quad x_0^{(2)} = \frac{3\pi}{2}, \quad x_0^{(3)} = \frac{5\pi}{2}, \quad x_0^{(4)} = \frac{7\pi}{2}.$$

Apply 3 iterations and use 5 decimals.

- 1) Since

$$F'(x) = -\sin x - \frac{\sinh x}{\cosh^2 x} = -\frac{\sin x \cdot \cosh^2 x + \sinh x}{\cosh^2 x},$$

the Newton-Raphson iteration is written

$$x_{n+1} = x_n - \frac{F(x_n)}{F'(x_n)} = x_n + \frac{\cos x_n \cdot \cosh^2 x_n + \cosh x_n}{\sin x_n \cdot \cosh^2 x_n + \sinh x_n}.$$

- 2) The requested iterations give with 5 decimals,

$n$	1	2	3	4
$x_0^{(n)}$	1,57080	4,71239	7,85398	10,99560
$x_1^{(n)}$	1,86265	4,69410	7,85476	10,99550
$x_2^{(n)}$	1,87507	4,69409	7,85476	10,99550
$x_3^{(n)}$	1,87510	4,69409	7,85476	10,99550

**Example 3.10** Given the function

$$F(x) = e^x \sin x - 1, \quad x \in \left[0, \frac{\pi}{2}\right].$$

Prove that the equation  $F(x) = 0$  has precisely one solution  $\alpha$ , and find this by an iteration in two steps.

Since both  $e^x$  and  $\sin x$  are increasing in  $\left[0, \frac{\pi}{2}\right]$ , and  $F(x)$  is continuous with  $F(0) = -1 < 0$  and  $F\left(\frac{\pi}{2}\right) - 1 > 0$ , there exists precisely one zero  $\alpha \in \left]0, \frac{\pi}{2}\right[$ .

Since

$$F'(x) = e^x (\sin x + \cos x),$$

it follows by **Newton-Raphson iteration** that

$$\alpha_{n+1} = \alpha_n - \frac{F(\alpha_n)}{F'(\alpha_n)} = \alpha_n - \frac{e^{\alpha_n} \sin \alpha_n - 1}{e^{\alpha_n} (\sin \alpha_n + \cos \alpha_n)}.$$

The next question depends on the choice of starting value. In the specific case, however, the process is fairly robust.

If we choose  $\alpha_0 = 1$ , then we get successively

$$\alpha_1 = 0,657, \quad \alpha_2 = 0,591, \quad \alpha_3 = 0,5885.$$

If we instead choose  $\alpha_0 = 0,5$  then we also get  $\alpha_3 = 0,5885$ .

Please click the advert

**THE MILKWAY**  
LAUNCHING GRADUATE CAREERS

**MILKROUND SYSTEM**  
Become a business star with internships, placements, graduate jobs & schemes from leading companies.  
[www.milkround.com](http://www.milkround.com)

**PLANET CAREER ADVICE**  
Inhabited by insights into business careers and orbited by application advice.

**FIRST CONTACT**  
Get matched to top business employers via intelligent emails landing in your inbox.

**Milkround.com: rated the #1 graduate recruitment website in the UK Graduate Careers Survey 2009 of 16,000 university finalists.**

**Milkround.com**



## 4 Sequences of functions

**Example 4.1** Prove that the sequence of functions

$$f_n(x) = \frac{x}{x^2+1} + \frac{x}{x^2+4} + \cdots + \frac{x}{x^2+n^2},$$

where  $f_n : [-1, 1] \rightarrow \mathbb{R}$ , is pointwise convergent on the interval  $[-1, 1]$ .

Hint. Apply the General principle of convergence.

Apply a programmable pocket calculator to sketch the graph of  $f_n(x)$  for some large  $n$ .

It can be proved that  $f_n$  converges uniformly on the interval  $[-1, 1]$  towards the function

$$f(x) = \begin{cases} \frac{1}{2} \left[ \pi \frac{e^{2\pi x} + 1}{e^{2\pi x} - 1} - \frac{1}{x} \right] & \text{for } x \neq 0, \\ 0 & \text{for } x = 0. \end{cases}$$

For any  $x \in [-1, 1]$  we have

$$|f_{n+m}(x) - f_n(x)| = \left| \frac{x}{x^2 + (n+1)^2} + \cdots + \frac{x}{x^2 + (n+m)^2} \right| \leq \sum_{j=1}^m \frac{1}{(n+j)^2}.$$

It can be proved from the *Theory of Fourier Series* that  $\sum_{n=1}^{\infty} \frac{1}{n^2} = \frac{\pi^2}{6}$  is convergent. This means that to any  $\varepsilon > 0$  there exists an  $N = N(\varepsilon) \in \mathbb{N}$ , such that

$$\sum_{j=1}^m \frac{1}{(n+j)^2} \leq \sum_{j=1}^{\infty} \frac{1}{(n+j)^2} = \sum_{j=n+1}^{\infty} \frac{1}{j^2} < \varepsilon \quad \text{for alle } n \geq N(\varepsilon).$$

By insertion we get that  $|f_{n+m}(x) - f_n(x)| < \varepsilon$  for  $n \geq N(\varepsilon)$ , not just pointwisely, but even uniformly.

Since every  $f_n$ ,  $n \in \mathbb{N}$  is an odd function, we shall only sketch the graph of  $f_n$  for  $x \in [0, 1]$ .

That the limit function  $f(x)$  is precisely the given function can either be shown by a formula from **Complex Function Theory** or by some clever application of a **Fourier series**. Note that

$$f(x) = \frac{1}{2} \left\{ \pi \coth(\pi x) - \frac{1}{x} \right\} \quad \text{for } x \neq 0. \quad \diamond$$

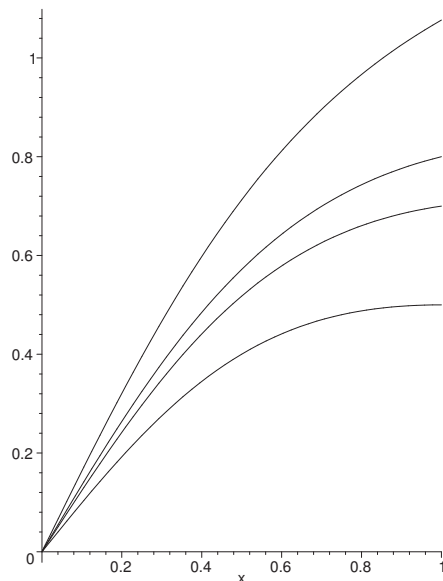
**Example 4.2** Prove that the sequence of functions  $f_n : \mathbb{R} \rightarrow \mathbb{R}$ , defined by

$$f_n(x) = \frac{1+x^4}{(1+x^2)(n+x^4)}, \quad n \in \mathbb{N},$$

converges uniformly towards the function 0.

**First variant.** Since  $0 < \frac{1+x^4}{n+x^4} \leq 1$ , and  $\sqrt{y} \geq y$  for  $y \in ]0, 1]$ , we get

$$\frac{1+x^4}{n+x^4} \leq \sqrt{\frac{1+x^4}{n+x^4}}, \quad \text{where we have put } y = \frac{1+x^4}{n+x^4}.$$



Hence we have the estimate

$$0 < f_n(x) = \frac{1 + x^4}{(1 + x^2)(n + x^4)} \leq \frac{\sqrt{1 + x^4}}{1 + x^2} \cdot \frac{1}{\sqrt{n + x^4}} \leq 1 \cdot \frac{1}{\sqrt{n}} \rightarrow 0 \quad \text{for } n \rightarrow \infty,$$

independent of  $x \in \mathbb{R}$ , so  $(f_n)$  converges uniformly towards 0 over  $\mathbb{R}$ .

**Second variant.** Put  $u = x^2$ . Then by a decomposition with respect to  $u$ ,

$$\begin{aligned} 0 < f_n(x) &= \frac{1 + u^2}{(1 + u)(n + u^2)} = \frac{2}{n + 1} \cdot \frac{1}{1 + u} + \frac{1}{1 + u} \left\{ \frac{1 + u^2}{n + u^2} - \frac{2}{n + 1} \right\} \\ &= \frac{2}{n + 1} \cdot \frac{1}{1 + u} + \frac{1}{1 + u} \left\{ \frac{u^2 - 1}{n + u^2} + 2 \left[ \frac{1}{n + u^2} - \frac{1}{n + 1} \right] \right\} \\ &= \frac{2}{n + 1} \cdot \frac{1}{1 + u} + \frac{u - 1}{n + u^2} + \frac{2}{1 + u} \cdot \frac{1 - u^2}{(n + u^2)(n + 1)} \\ &= \frac{2}{n + 1} \cdot \frac{1}{1 + u} + \frac{u - 1}{n + u^2} \left\{ 1 - \frac{2}{n + 1} \right\}. \end{aligned}$$

Since  $\frac{u - 1}{n + u^2}$  has its maximum for  $u = \sqrt{n + 1}$ , and since  $1 - \frac{2}{n + 1} \in [0, 1[$ , we get the estimate

$$0 < f_n(x) < \frac{1}{n + 1} + \frac{\sqrt{n + 1} - 1}{n + n + 1} \cdot 1 < \frac{2}{n + 1} + \frac{\sqrt{n + 1}}{2n + 1} \rightarrow 0 \quad \text{for } n \rightarrow \infty,$$

independently of  $u \in \mathbb{R}_+ \cup \{0\}$ , hence also independently of  $x \in \mathbb{R}$ . This proves that  $(f_n)$  converges uniformly towards 0 all over  $\mathbb{R}$ .

**Example 4.3** Find a sequence of  $C^1$ -functions  $f_n : [0, 1] \rightarrow \mathbb{R}$ , which converges uniformly on  $[0, 1]$  towards a  $C^1$ -function  $f : [0, 1] \rightarrow \mathbb{R}$ , and for which the sequence of derivatives  $(f'_n)$  is pointwise convergent, but not converging towards the function  $f'$ .

The best strategy must be first to choose some convenient pointwisely convergent sequence of functions  $(f'_n)$ , where the limit function is not continuous, and then integrate the terms of this sequence from 0.

It is well-known that  $g_n(x) = x^n$  is pointwise convergent towards the discontinuous function

$$g(x) = \begin{cases} 0 & \text{for } x \in [0, 1[, \\ 1 & \text{for } x = 1. \end{cases}$$

Choose

$$f_n(x) = \int_0^x g_n(t) dt = \frac{x^{n+1}}{n+1}.$$

It is then obvious that

$$f'_n(x) = x^n = g_n(x) \rightarrow g(x) \quad \text{for } n \rightarrow \infty.$$

It follows from the estimate

$$|f_n(x) - 0| = \frac{x^{n+1}}{n+1} \leq \frac{1}{n+1} \rightarrow 0 \quad \text{for } n \rightarrow \infty, \quad \text{alle } x \in [0, 1],$$

that  $f_n \rightarrow 0$  uniformly. It is obvious that  $f(x) = 0$  is a differentiable function and  $f'(x) = 0$ , which is  $\neq \lim f'_n(x) = g(x)$ .

Please click the advert



# CHALLENGE YOURSELF

## WWW.STUDYINSWEDEN.SE

Today's job market values ambitious, innovative, perceptive team players. Swedish universities foster these qualities through a forward-thinking culture where you're close to the latest ideas and global trends.

Whatever your career goals may be, studying in Sweden will give you valuable skills and a competitive advantage for your future. [www.studyinsweden.se](http://www.studyinsweden.se)

**Si.**  
Swedish Institute

By using the example above (one introduces a singularity at  $x = 1$ ) it is possible to construct a sequence of functions  $(f_n)$ , which converges uniformly towards 0 in  $[0, 1]$  where

$$\lim_{n \rightarrow \infty} f'_n(x) \neq 0 \quad \text{for ethvert } x \in [0, 1] \cap \mathbb{Q}.$$

The construction, however, uses series which formally have not yet been introduced.

**Example 4.4** For every  $n \in \mathbb{N}$  we put

$$f_n(x) = nxe^{-nx^2}, \quad x \in \mathbb{R}.$$

Find  $\lim_{n \rightarrow \infty} f_n(x)$ , and prove that

$$\lim_{n \rightarrow \infty} \int_0^1 f_n(x) dx \neq \int_0^1 \lim_{n \rightarrow \infty} f_n(x) dx.$$

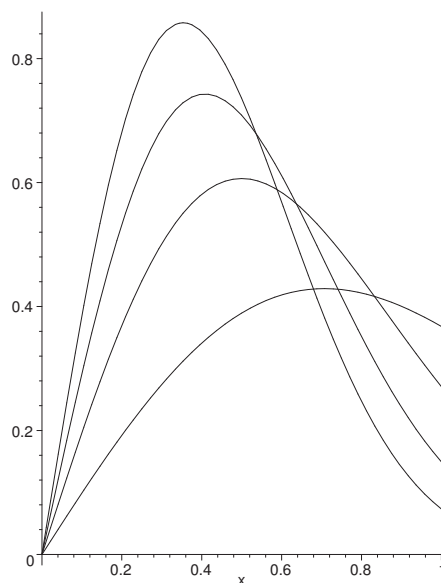
1) **Pointwise convergence.** What is here obvious? When  $x = 0$  is fixed, then

$$f_n(0) = 0 \rightarrow 0 = f(0) \quad \text{for } n \rightarrow \infty.$$

If instead  $x \neq 0$  (fast), it follows by the magnitudes that

$$f_n(x) = x \cdot \frac{n}{(e^{x^2})^2} \rightarrow 0 \quad \text{for } n \rightarrow \infty, \text{ da } e^{x^2} > 1.$$

As a conclusion we get that  $(f_n)$  is pointwisely convergent with the limit function



$$f(x) = \lim_{n \rightarrow \infty} f_n(x) = 0.$$

2) **The integrals.** It follows immediately that

$$\int_0^1 \lim_{n \rightarrow \infty} f_n(x) dx = \int_0^1 f(x) dx = \int_0^1 0 dx = 0.$$

Then we get by the substitution  $u = nx^2$ ,  $du = 2nxdx$ , that

$$\int_0^1 f_n(x) dx = \int_0^1 nxe^{-nx^2} dx = \frac{1}{2} \int_0^n e^{-u} du = \frac{1}{2} (1 - e^{-n}).$$

Finally, by taking the limit,

$$\lim_{n \rightarrow \infty} \int_0^1 f_n(x) dx = \lim_{n \rightarrow \infty} \frac{1}{2} (1 - e^{-n}) = \frac{1}{2} \neq 0 = \int_0^1 \lim_{n \rightarrow \infty} f_n(x) dx.$$

**Remark 4.1** All functions  $f_n(x)$  are continuous. Since the integration and the limit *cannot* be interchanged, the convergence of  $(f_n)$  can *never* be uniform.  $\diamond$

**Example 4.5** Let  $f_n : \mathbb{R} \rightarrow \mathbb{R}$  be given by

$$f_n(x) = \frac{x^{2n}}{1 + x^{2n}}, \quad n \in \mathbb{N}.$$

1) Prove that the sequence  $(f_n)$  is pointwise convergent, but not uniformly convergent.

2) Prove that the sequence  $(f_n)$  is uniformly convergent in the interval  $\left[-\frac{1}{2}, \frac{1}{2}\right]$ .

1) This example is tricky, because one must split it up into three cases,

$$(a) |x| < 1, \quad (b) |x| = 1, \quad (c) |x| > 1.$$

In the remaining part of this question we keep  $x$  *fixed* in the given domain.

(a) If  $|x| < 1$ , then

$$|f_n(x) - 0| = f_n(x) = \frac{x^{2n}}{1 + x^{2n}} \leq x^{2n} \rightarrow 0 \quad \text{for } n \rightarrow \infty.$$

(b) If  $|x| = 1$ , i.e.  $x = \pm 1$ , then  $f_n(\pm 1) = \frac{1}{2}$ .

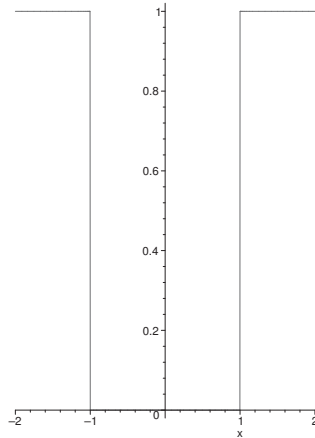
(c) If  $|x| > 1$ , then

$$f_n(x) = \frac{x^{2n}}{1 + x^{2n}} = 1 - \frac{1}{1 + x^{2n}} \rightarrow 1 - 0 = 1 \quad \text{for } n \rightarrow \infty.$$

Summarizing we see that  $(f_n)$  is pointwise convergent with the limit function

$$f(x) = \begin{cases} 0 & \text{for } |x| < 1, \\ \frac{1}{2} & \text{for } |x| = 1, \\ 1 & \text{for } |x| > 1. \end{cases}$$

Since every  $f_n$  is continuous and the limit function  $f$  is *not* continuous [cf. the figure], it follows that the sequence is not uniformly convergent.



2) **Get rid of  $x$ !** When  $|x| \leq \frac{1}{2}$ , we get the estimate

$$|f_n(x) - 0| = f_n(x) = \frac{x^{2n}}{1 + x^{2n}} \leq x^{2n} \leq \left(\frac{1}{2}\right)^{2n} \rightarrow 0 \text{ for } n \rightarrow \infty.$$

Please click the advert



## DIVERSE - INNOVATIVE - INTERNATIONAL

**Are you considering a European business degree?**

Copenhagen Business School is one of the largest business schools in Northern Europe with more than 15,000 students from Europe, North America, Australia and Asia.

Are you curious to know how a modern European business school competes with a diverse, innovative and international study environment?

Please visit Copenhagen Business School at [www.cbs.dk](http://www.cbs.dk)



**Copenhagen Business School**  
HANDELSHØJSKOLEN

Diversity creating knowledge



For every  $\varepsilon > 0$  there exists an  $N$ , such that for every  $n \geq N$  and every  $x \in \left[-\frac{1}{2}, \frac{1}{2}\right]$ ,

$$|f_n(x) - 0| \leq x^{2n} \leq \left(\frac{1}{2}\right)^{2n} < \varepsilon \quad [\text{for } n \geq N(\varepsilon)],$$

i.e.  $(f_n)$  converges *uniformly* towards 0 on  $\left[-\frac{1}{2}, \frac{1}{2}\right]$ .

**Example 4.6** Prove that the sequence of functions

$$f_n(x) = \frac{x}{1+x^n}, \quad x \in [0, \infty[,$$

is pointwise convergent, and find its limit function.

Check if the convergence is uniform.

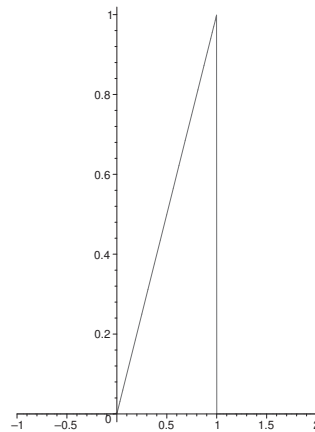
1) If  $x \in [0, 1[$  is kept fixed, then  $x^n$  tends to 0 for  $n \rightarrow \infty$ , hence

$$f_n(x) = \frac{x}{1+x^n} \rightarrow x \quad \text{for } n \rightarrow \infty, \quad \text{when } x \in [0, 1[.$$

2) If  $x = 1$ , or  $f_n(1) = \frac{1}{2}$  for every  $n \in \mathbb{N}$ , then  $f_n(1) \rightarrow \frac{1}{2}$  for  $n \rightarrow \infty$ .

3) If  $x > 1$  is kept fixed, then  $x^n$  tends towards  $\infty$  for  $n \rightarrow \infty$ , hence

$$f_n(x) = \frac{x}{1+x^n} \rightarrow 0 \quad \text{for } n \rightarrow \infty, \quad \text{når } x \in ]1, \infty[.$$



As a conclusion we see that  $(f_n)$  is pointwise convergent and its limit function is

$$f(x) = \begin{cases} x & \text{for } x \in [0, 1[, \\ \frac{1}{2} & \text{for } x = 1, \\ 0 & \text{for } x \in ]1, \infty[. \end{cases}$$

Since every  $f_n(x)$  is continuous on  $[0, \infty[$ , and  $f(x)$  is *not* continuous, it follows that the convergence *cannot be uniform*.

**Example 4.7** Prove that the sequence of functions  $(f_n)$ , which is given by

$$f_n(x) = \frac{1}{(1+x^2)^n}, \quad n \in \mathbb{N},$$

is pointwise convergent, and find its limit function.

Check if the convergence is uniform in the interval  $[0, \infty[$ , in the interval  $]0, \infty[$ , and in the interval  $[1, \infty[$ , respectively.

**Pointwise convergence.** What is obvious? For  $x = 0$  we have

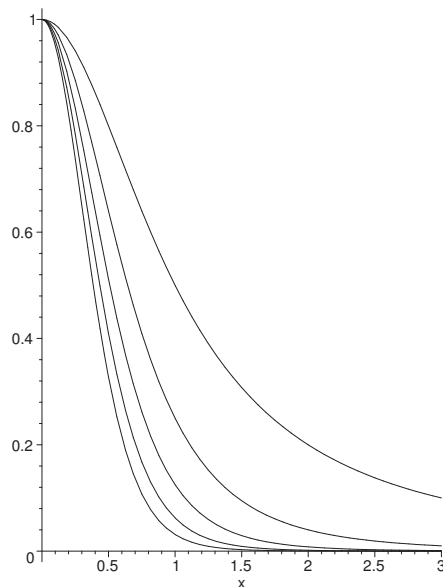
$$f_n(0) = \frac{1}{(1+0^2)^n} = \frac{1}{1^n} = 1 \rightarrow 1 = f(0) \quad \text{for } n \rightarrow \infty.$$

Let  $x \neq 0$  be *fixed*. If we put  $1+x^2 = a > 1$  (a fixed number), we see that

$$f_n(x) = \frac{1}{(1+x^2)^n} = \frac{1}{a^n} \rightarrow 0 \quad \text{for } n \rightarrow \infty.$$

We conclude that we have *pointwise convergence* and the limit function is

$$f(x) = \begin{cases} 1 & \text{for } x = 0, \\ 0 & \text{for } x \neq 0. \end{cases}$$



**Uniform convergence in  $[0, \infty[$ ?** This is not possible, because every  $f_n$  is continuous, while the limit function is clearly discontinuous in 0.



**Uniform convergence i**  $]0, \infty[$ ? This is a really tricky question, because the limit function  $f(x) = 0$  is continuous in  $]0, \infty[$ . We shall nevertheless prove that the convergence is *not* uniform!

First note that the range of every  $f_n$  is  $]0, 1[$ , i.e.  $f_n(]0, \infty[) = ]0, 1[$ .

If we choose  $x_n = \sqrt[n]{\sqrt{2}-1} > 0$ , we get

$$|f_n(x_n) - 0| = f_n(x_n) = \frac{1}{(1 + \{\sqrt[n]{2}-1\})^n} = \frac{1}{2}.$$

Thus, we shall *always* obtain the value  $\frac{1}{2}$  for every  $f_n$ , and since the constant  $\frac{1}{2}$  “not can be made as small as possible”, the convergence *cannot be uniform*.

**Uniform convergence in**  $[1, \infty[$ ? In this case the limit function is again  $f(x) = 0$ . Since we are far away from the discontinuity at  $x = 0$ , it will be reasonable to get rid of  $x$  by an estimation: For  $x \geq 1$  we have  $1 + x^2 \geq 2$ , thus

$$|f_n(x) - 0| = f_n(x) = \frac{1}{(1 + x^2)^n} \leq \frac{1}{2^n} \rightarrow 0 \quad \text{for } n \rightarrow \infty,$$

and we conclude that the convergence is uniform in  $[1, \infty[$ .

**Remark 4.2** The above will always be accepted. A more careful solution is the following.

1) To every  $\varepsilon > 0$  we choose  $N = N(\varepsilon)$ , such that

$$\frac{1}{2^N} \leq \varepsilon \quad \left( \text{choose } N \geq \frac{\ln(1/\varepsilon)}{\ln 2} \text{ fixed} \right).$$

2) Since  $(1/2^n)$  is decreasing for increasing  $n$ , we have

$$\frac{1}{2^n} \leq \frac{1}{2^N} \leq \varepsilon \quad \text{for every } n \geq N(\varepsilon) \quad [\text{independently of } x].$$

3) For every  $x \geq 1$  we have

$$\frac{1}{(1 + x^2)^n} \leq \frac{1}{2^n} \leq \varepsilon \quad \text{for every } n \geq N(\varepsilon) \quad [\text{independently of } x].$$

Finally we summarize the above:

To every  $\varepsilon > 0$  there exists an  $N = N(\varepsilon)$  [which does not depend on  $x$ ], such that for every  $n \geq N$  and every  $x \geq 1$ ,

$$|f_n(x) - 0| \leq \varepsilon,$$

which means that we have uniform convergence on  $[1, \infty[$ .

**Example 4.8** . Prove that the sequence of functions  $(g_n)$ , given by

$$g_n(x) = \frac{1 + ne^x}{x + n}, \quad x \in [0, 1],$$

converges uniformly towards the function  $e^x$ ,  $x \in [0, 1]$ .

Find the limit function  $\lim_{n \rightarrow \infty} \int_0^1 g_n(x) dx$ .

Let  $x \in [0, 1]$ . The difference between  $g_n(x)$  and the possible limit function  $e^x$  is given by

$$g_n(x) - e^x = \frac{1 + ne^x}{x + n} - e^x = \frac{1}{x + n} - \frac{x}{x + n} e^x.$$

This gives For  $x \in [0, 1]$  the following estimate,

$$|g_n(x) - e^x| \leq \frac{1}{x + n} + \frac{xe^x}{x + n} \leq \frac{1}{0 + n} + \frac{1 \cdot e^1}{0 + n} = \frac{1 + e}{n},$$

because a fraction with a positive numerator and positive denominator is made bigger, if we increase the numerator and the denominator is replaced by a smaller positive constant.

Please click the advert



## Sharp Minds - Bright Ideas!

Employees at FOSS Analytical A/S are living proof of the company value - First - using new inventions to make dedicated solutions for our customers. With sharp minds and cross functional teamwork, we constantly strive to develop new unique products - Would you like to join our team?

FOSS works diligently with innovation and development as basis for its growth. It is reflected in the fact that more than 200 of the 1200 employees in FOSS work with Research & Development in Scandinavia and USA. Engineers at FOSS work in production, development and marketing, within a wide range of different fields, i.e. Chemistry, Electronics, Mechanics, Software, Optics, Microbiology, Chemometrics.

**We offer**  
*A challenging job in an international and innovative company that is leading in its field. You will get the opportunity to work with the most advanced technology together with highly skilled colleagues.*

*Read more about FOSS at [www.foss.dk](http://www.foss.dk) - or go directly to our student site [www.foss.dk/sharpminds](http://www.foss.dk/sharpminds) where you can learn more about your possibilities of working together with us on projects, your thesis etc.*

The Family owned FOSS group is the world leader as supplier of dedicated, high-tech analytical solutions which measure and control the quality and production of agricultural, food, pharmaceutical and chemical products. Main activities are initiated from Denmark, Sweden and USA with headquarters domiciled in Hillerød, DK. The products are marketed globally by 23 sales companies and an extensive net of distributors. In line with the corevalue to be 'First', the company intends to expand its market position.

**Dedicated Analytical Solutions**

FOSS  
 Slangerupgade 69  
 3400 Hillerød  
 Tel. +45 70103370  
[www.foss.dk](http://www.foss.dk)



Since the right hand side  $\frac{1+e}{n} \rightarrow 0$  for  $n \rightarrow \infty$ , is *independent of*  $x \in [0, 1]$ , it follows that  $(g_n)$  converges *uniformly* towards  $e^x$  in the interval  $[0, 1]$ .

Since the convergence is *uniform*, and the interval of integration  $[0, 1]$  is bounded, we can interchange the limit process and the integration,

$$\lim_{n \rightarrow \infty} \int_0^1 g_n(x) dx = \lim_{n \rightarrow \infty} \int_0^1 \frac{1+ne^x}{x+n} dx = \int_0^1 \lim_{n \rightarrow \infty} \left( \frac{1+ne^x}{x+n} \right) dx = \int_0^1 e^x dx = e - 1.$$

**Remark 4.3** Note that none of the integrals

$$\int_0^1 \frac{1+ne^x}{x+n} dx, \quad n \in \mathbb{N},$$

can be expressed by elementary functions.  $\diamond$

**Example 4.9** Let  $f_n : [0, 1] \rightarrow \mathbb{R}$  be given by

$$f_n(x) = nx(1-x)^n, \quad n \in \mathbb{N}.$$

- 1) Prove that the sequence  $(f_n)$  is pointwise convergent, and find  $\lim_{n \rightarrow \infty} f_n(x)$ .
- 2) Prove that

$$\lim_{n \rightarrow \infty} \int_0^1 f_n(x) dx = \int_0^1 \lim_{n \rightarrow \infty} f_n(x) dx.$$

- 3) Find for every  $n \in \mathbb{N}$  the maximum of  $f_n(x)$ .
- 4) Prove that  $(f_n)$  is not uniformly convergent.

- 1) If  $x = 0$ , then  $f_n(0) = 0$ , så  $f(0) = 0$ . If  $x \in ]0, 1]$ , then  $a = 1 - x \in [0, 1[$ , i.e.

$$f_n(x) = (1-a) \cdot na^n \rightarrow 0 \quad \text{for } n \rightarrow \infty$$

according to the magnitudes of the functions.

It follows that  $(f_n)$  converges pointwise towards 0 in  $[0, 1]$ .

- 2) We get by a partial integration that

$$\begin{aligned} \int_0^1 f_n(x) dx &= n \int_0^1 x(1-x)^n dx = \left[ -\frac{n}{n+1} x(1-x)^{n+1} \right]_0^1 + \frac{n}{n+1} \int_0^1 (1-x)^{n+1} dx \\ &= 0 + \frac{n}{(n+1)(n+2)} [-(1-x)^{n+2}]_0^1 = \frac{n}{(n+1)(n+2)}. \end{aligned}$$

**Alternatively** change the variable  $t = 1 - x$ , by which we get

$$\begin{aligned} \int_0^1 f_n(x) dx &= n \int_0^1 x(1-x)^n dx = n \int_0^1 (1-t)t^n dt = n \int_0^1 \{t^n - t^{n+1}\} dt \\ &= n \left\{ \frac{1}{n+1} - \frac{1}{n+2} \right\} = \frac{n}{(n+1)(n+2)} \end{aligned}$$

There are other alternatives, which the reader may find himself.

It follows that

$$\begin{aligned}\lim_{n \rightarrow \infty} \int_0^1 f_n(x) dx &= \lim_{n \rightarrow \infty} \frac{n}{(n+1)(n+2)} = \lim_{n \rightarrow \infty} \frac{1}{\left(1 + \frac{1}{n}\right) \cdot (n+2)} = 0 \\ &= \int_0^1 0 dx = \int_0^1 \lim_{n \rightarrow \infty} f_n(x) dx.\end{aligned}$$

**Alternatively** one may use that

$$\frac{n}{(n+1)(n+2)} = \frac{2}{n+2} - \frac{1}{n+1} \rightarrow 0 \quad \text{for } n \rightarrow \infty.$$

Since we now can interchange the limit process and the integration, we may *erroneously* jump to the wrong conclusion that the convergence should be uniform. The last two questions of the example show that this is not the case.

3) We get by differentiation

$$f'_n(x) = n(1-x)^n - n^2x(1-x)^{n-1} = n(1-x)^{n-1}(1-x-nx) = n(1-x)^{n-1}\{1-(n+1)x\}.$$

Since  $f_n(0) = f_n(1) = 0$ , and  $f_n(x) > 0$  for  $0 < x < 1$ , the continuous function  $f_n(x)$  must have a maximum.

Since  $f_n \in C^\infty$ , and since  $f'_n(x) = 0$  is only fulfilled for  $x = \frac{1}{n+1}$  in  $]0, 1[$ , this value corresponds to the unique maximum. The value of the function here is

$$f_n\left(\frac{1}{n+1}\right) = n \cdot \frac{1}{n+1} \left(1 - \frac{1}{n+1}\right)^n = \left(1 - \frac{1}{n+1}\right)^{n+1}.$$

4) We see that

$$(5) \quad \lim_{n \rightarrow \infty} f_n\left(\frac{1}{n+1}\right) = \lim_{n \rightarrow \infty} \left(1 - \frac{1}{n+1}\right)^{n+1} = \frac{1}{e} \neq 0.$$

**Alternatively**,  $\ln(1-x) = -x + x\varepsilon(x)$  according to Taylor's formula. Putting  $x = \frac{1}{n+1}$  we get

$$\begin{aligned}\ln \left\{ \left(1 - \frac{1}{n+1}\right)^{n+1} \right\} &= (n+1) \ln \left(1 - \frac{1}{n+1}\right) \\ &= (n+1) \left\{ -\frac{1}{n+1} + \frac{1}{n+1} \varepsilon\left(\frac{1}{n+1}\right) \right\} \rightarrow -1 + \varepsilon\left(\frac{1}{n+1}\right) \rightarrow -1 \\ &\quad \text{for } n \rightarrow \infty.\end{aligned}$$

Now exp is continuous, hence

$$f_n\left(\frac{1}{n+1}\right) = \left(1 - \frac{1}{n+1}\right)^{n+1} = \exp\left(-1 + \varepsilon\left(\frac{1}{n+1}\right)\right) \rightarrow \frac{1}{e} \quad \text{for } n \rightarrow \infty.$$

According to (5) we can find an  $N \in \mathbb{N}$ , such that

$$f_n \left( \frac{1}{n+1} \right) \geq \frac{1}{2} \cdot \frac{1}{e} > 0 \quad \text{for all } n \geq N.$$

Since  $\frac{1}{2e}$  is a constant (it cannot be made as small as we wish), the convergence *cannot* be uniform.

**Example 4.10** Given the function

$$F(x) = e^x \sin x - 1, \quad x \in \left[0, \frac{\pi}{2}\right].$$

from Example 3.10. Let  $f_n : \left]0, \frac{\pi}{2}\right] \rightarrow \mathbb{R}$  be given by

$$f_n(x) = x - \frac{1}{(e^x \sin x)^n}, \quad n \in \mathbb{N}.$$

- 1) Express by means of  $\alpha$  the largest set  $A \subseteq \left]0, \frac{\pi}{2}\right]$ , for which the sequence  $(f_n)$  is pointwise convergent in  $A$ . Find the limit function.
- 2) Check if the sequence is also uniformly convergent on  $A$ . Does there exist a largest set  $B \subseteq \left]0, \frac{\pi}{2}\right]$ , such that the sequence is uniformly convergent on  $B$ ?

- 1) Since  $e^x \sin x = F(x) + 1 > 0$  for  $x \in \left]0, \frac{\pi}{2}\right]$ , the sequence of functions can also be written

$$f_n(x) = x - \left\{ \frac{1}{F(x) + 1} \right\}^n, \quad x \in \left]0, \frac{\pi}{2}\right], \quad n \in \mathbb{N}.$$

Since  $(q^n)$  is convergent for  $-1 < q \leq 1$ , and since  $F(x) + 1 > 0$ , we get the condition

$$0 < \frac{1}{1 + F(x)} \leq 1, \quad \text{i.e. } F(x) \geq 0.$$

According to Example 3.10 this is true for  $x \in A = \left[\alpha, \frac{\pi}{2}\right]$ , because  $F(\alpha) = 0$ , and because  $F(x)$  is increasing.

If  $x = \alpha$ , then  $F(\alpha) + 1 = 1$ , hence

$$f_n(\alpha) = \alpha - 1.$$

If  $\alpha < x \leq \frac{\pi}{2}$ , then  $0 < \frac{1}{F(x) + 1} < 1$ , hence  $\left\{ \frac{1}{F(x) + 1} \right\}^n \rightarrow 0$  for  $n \rightarrow \infty$ . We conclude that the limit function is

$$f(x) = \begin{cases} \alpha - 1 & \text{for } x = \alpha, \\ x & \text{for } x \in \left] \alpha, \frac{\pi}{2} \right]. \end{cases}$$

- 2) Since every function  $f_n$  is continuous in  $A$ , and the limit function  $f$  is *not* continuous in  $A$ , the sequence *cannot* be uniformly convergent in  $A$ .

There does not exist any largest set  $B$ , on which  $(f_n)$  is uniformly convergent. In fact, for every  $\varepsilon \in ]0, \frac{\pi}{2} - \alpha[$  we have that  $(f_n)$  is uniformly convergent in  $[\alpha + \varepsilon, \frac{\pi}{2}]$ , and the smallest set which contains all these intervals is  $]\alpha, \frac{\pi}{2}]$ , on which  $(f_n)$  is *not* uniformly convergent.

ALTERNATIVELY, choose a sequence  $(y_n)$ , such that


$$\frac{1}{1 + F(y_n)} = \frac{1}{\sqrt[n]{2}}, \quad \text{i.e. } F(y_n) = \sqrt[n]{2} - 1 \quad (\rightarrow 0 \text{ for } n \rightarrow \infty).$$

Then  $y_n \rightarrow \alpha+$ , and


$$f_n(y_n) = y_n - \frac{1}{2} \rightarrow \alpha - \frac{1}{2} \quad \text{for } n \rightarrow \infty,$$

hence  $(f_n(y_n))$  neither converges towards  $\alpha$  nor towards  $\alpha - 1$ .

Please click the advert







[www.1calendar.dk](http://www.1calendar.dk)

## 5 Linear difference equations

**Example 5.1** 1) Find the complete solution of the difference equation

$$x_k + x_{k-1} = 0, \quad k \geq 1.$$

2) Find a particular solution of the difference equation

$$(6) \quad x_k + x_{k-1} = 4, \quad k \geq 1,$$

and then find the total solution of (6), for which  $x_0 = 1$ .

**A.** Linear difference equation of first order.

**D.** Find the solution of the homogeneous equation and then a particular solution.

**I.** 1) The characteristic polynomial  $R + 1$  has the root  $R = -1$ , thus the complete solution of the homogeneous equation is given by

$$x_k = c \cdot (-1)^k, \quad k \in \mathbb{N}_0, \quad c \in \mathbb{R}.$$

2) By inspection we see that the constant solution  $x_k = 2$  is one solution of (6). Hence the complete solution is

$$x_k = 2 + c \cdot (-1)^k, \quad k \in \mathbb{N}_0, \quad c \in \mathbb{R}.$$

For  $k = 0$  we get  $x_0 = 1 = 2 + c$ , i.e.  $c = -1$ , and the wanted solution becomes

$$x_k = 2 + (-1)^{k+1}, \quad k \in \mathbb{N}_0,$$

i.e.

$$x_k = \begin{cases} 1 & \text{for } k \text{ even,} \\ 3 & \text{for } k \text{ odd,} \end{cases} \quad k \in \mathbb{N}_0.$$

**Example 5.2** Find a particular solution of the difference equation

$$x_k - x_{k-1} = 4, \quad k \geq 1,$$

and then find the complete solution.

**A.** Difference equation of first order.

**D.** Guess some particular solution.

**I.** Put  $x_k = 4k$ . Then we get by insertion (i.e. we are testing this sequence) that

$$x_k - x_{k-1} = 4k - 4(k-1) = 4,$$

and we have shown that  $x_k = 4k$ ,  $k \in \mathbb{N}$ , is a particular solution.

The characteristic polynomial  $R - 1$  has the root  $R = 1$ , hence the total solution is given by

$$x_k = 4k + c, \quad k \in \mathbb{N}_0, \quad c \in \mathbb{R}.$$

**Example 5.3** Find that solution of the difference equation

$$x_k + x_{k-1} = k, \quad k \geq 1,$$

for which  $x_0 = 2$ .

**A.** Linear, inhomogeneous difference equation of first order.

**D.** Guess a particular solution.

**I.** If we guess on  $x_k = \alpha k + \beta$ , then we get by insertion that

$$\alpha k + \beta + \alpha(k-1) + \beta = 2\alpha k = (2\beta - \alpha),$$

which is equal to the variable  $k$  for  $\alpha = \frac{1}{2}$  and  $\beta = \frac{1}{4}$ .

Since the characteristic polynomial  $R + 1$  has the root  $R = -1$ , the complete solution is given by

$$x_k = \frac{1}{2}k + \frac{1}{4} + c \cdot (-1)^k, \quad k \in \mathbb{N}_0, \quad c \in \mathbb{R}.$$

For  $k = 0$  we get

$$c = x_0 - \frac{1}{4} = 2 - \frac{1}{4} = \frac{7}{4},$$

thus the wanted solution is

$$x_k = \frac{1}{2}k + \frac{1}{4} + \frac{7}{4} \cdot (-1)^k, \quad k \in \mathbb{N}_0.$$

**Example 5.4** Find that solution of the difference equation

$$x_k - x_{k-1} = k, \quad k \geq 1,$$

for which  $x_2 = 4$ .

**A.** Linear, inhomogeneous difference equation of first order.

**D.** Solve the corresponding homogeneous equation. Then guess a particular solution.

**I.** The characteristic polynomial  $R - 1$  has the root  $R = 1$ . Thus, the complete solution of the homogeneous equation is given by

$$x_k = c, \quad k \in \mathbb{N}_0, \quad c \in \mathbb{R}.$$

Since already  $x_k = 1$  is a solution of the homogeneous equation and since  $k \cdot 1$  occurs on the right hand side of the equation, we guess in analogy with the method of solving differential equations on a solution of the structure

$$x_k = \alpha k^2 + \beta k, \quad k \in \mathbb{N}_0.$$



We get by insertion,

$$x_k - x_{k-1} = \alpha \{k^2 - (k-1)^2\} + \beta \{k - (k-1)\} = \alpha(2k-1) + \beta = 2\alpha k + (\beta - \alpha).$$

This expression is equal to the variable  $k$ , if  $\alpha = \beta = \frac{1}{2}$ , thus the complete solution is

$$x_k = \frac{1}{2} k^2 + \frac{1}{2} k + c, \quad k \in \mathbb{N}_0, \quad c \in \mathbb{R}.$$

If  $k = 2$ , we get the condition

$$4 = \frac{1}{2} \cdot 2^2 + \frac{1}{2} \cdot 2 + c = 3 + c,$$

from which  $c = 1$ , and the solution is

$$x_k = \frac{1}{2} k^2 + \frac{1}{2} k + 1, \quad k \in \mathbb{N}_0.$$

**Example 5.5** *At some given time we have 1000 bacteria in a culture of bacteria. We assume in general that the number of bacteria is increased by 250 % every second hour. How many bacteria will there be after 24 hours?*

**A.** Exponential growth (difference equation). Notice that since we are looking at  $12 \cdot 2 = 24$  hours, we shall find  $x_{12}$ .

**D.** There are some problems here with the interpretation of the text. If the *increase* really is 250 %, then the corresponding difference equation becomes

$$x_k = x_{k-1} + \frac{5}{2} x_{k-1} = \frac{7}{2} x_{k-1}.$$

If the meaning instead is that the increase is 250 % of the previous value at time  $(k-1)2$ , then the difference equation becomes

$$x_k = \frac{5}{2} x_{k-1}.$$

Since there is some linguistic uncertainty in the original text (I do not remember where I found this example), we shall as an exercise go through the solving of both equations.

**I.** We have  $x_0 = 1000$ .

1) In the first interpretation we get

$$x_{12} = \left(\frac{7}{2}\right)^{12} \cdot 1000 \approx 3\,379\,220\,508.$$

2) In the second interpretation we get

$$x_{12} = \left(\frac{5}{2}\right)^{12} \cdot 1000 \approx 59\,604\,645.$$

**Example 5.6** *A man pays every quarter 600 euro into his account. The interest is 11 % p.a., where the interest is added every quarter. When will there be 25 000 euro on the account?*

A. Difference equation for savings.

D. Write down the model of difference equation and then solve this equation.

I. Let  $x_k$  denote the capital at the  $k$ -th quarter after his payment. Then  $x_0 = 600$ , and since the interest per quarter is  $\frac{11}{4}$  %, we get the equation

$$x_k = 600 + \left\{ 1 + \frac{11}{400} \right\} x_{k-1}, \quad k \in \mathbb{N}.$$

This is then rewritten as the difference equation

$$x_k - \frac{411}{400} x_{k-1} = 600.$$

Please click the advert

**Design your  
own future at  
MAN Diesel**

[www.mandiesel.com](http://www.mandiesel.com)

**MAN Diesel** – Powering the World



Download free books at [BookBooN.com](http://BookBooN.com)

The solution of the corresponding equation is

$$x_k = c \cdot \left(\frac{411}{400}\right)^k, \quad k \in \mathbb{N}_0, \quad c \in \mathbb{R}.$$

Then we guess a particular solution of the structure  $x_k = \alpha$ ,  $k \in \mathbb{N}_0$ . We get by insertion

$$x_k - \frac{411}{400} x_{k-1} = -\frac{11}{400} \alpha,$$

which is equal to 600 for

$$\alpha = -\frac{240\,000}{11}.$$

Thus the complete solution is

$$x_k = -\frac{240\,000}{11} + c \cdot \left(\frac{411}{400}\right)^k, \quad k \in \mathbb{N}_0, \quad c \in \mathbb{R}.$$

For  $k = 0$  we get

$$c = 600 + \frac{240\,000}{11} = \frac{246\,600}{11},$$

so the solution becomes

$$x_k = -\frac{240\,000}{11} + \frac{246\,600}{11} \cdot \left(\frac{411}{400}\right)^k, \quad k \in \mathbb{N}_0.$$

Finally, we shall find the smallest  $k \in \mathbb{N}_0$ , for which  $x_k \geq 25\,000$ . Hence we shall find the smallest  $k \in \mathbb{N}_0$ , for which

$$\frac{246\,600}{11} \cdot \left(\frac{411}{400}\right)^k \geq 25\,000 + \frac{240\,000}{11} = \frac{515\,000}{11}.$$

This is rearranged as

$$\left(\frac{411}{400}\right)^k \geq \frac{515\,000}{246\,000} = \frac{2575}{1233},$$

from which

$$k \geq \frac{\ln\left(\frac{2575}{1233}\right)}{\ln\left(\frac{411}{400}\right)} \approx \frac{0,7364}{0,0271} \approx 27,15.$$

Hence, we see that after 28 quarters, corresponding to 7 years, we get  $x_k \geq 25\,000$  for the first time.

**C. WEAK CONTROL.** There is paid  $4 \cdot 600 = 2400$  euro per year, hence 16 800 euro in 7 years, so the result looks reasonable. considering the high (and today unrealistic) interest.

**Example 5.7** In the following examples we shall deal with annuity loans. The background is in general the following:

A loan on  $G_0$  euro is repaid with a fixed payment of  $A$  euro per settling period, and the interest to be paid of the debt is  $r$  per settling period (where we give  $r$  as a usual fraction, and not in %). Let  $G_n$  denote the remaining debt after  $n$  settling periods.

1) Prove that  $G_n$  satisfies

$$G_n - (1+r)G_{n-1} = -A, \quad n \geq 1,$$

and then find  $G_n$ .

2) Establish the condition that the debt is repaid.

**A.** Annuity loans.

**D.** Analyze the situation at the end of the  $n$ -th settling period in order to find the difference equation of the problem. Then solve this difference equation.

**I.** 1) The remaining debt  $G_n$  at the  $n$ -th settling period is equal to the remaining debt  $G_{n-1}$  at the  $(n-1)$ -th settling period, plus the interest,  $\times G_{n-1}$ , and minus the payment  $A$ , i.e.

$$G_n = (1+r)G_{n-1} - A,$$

which we rearrange as the solution

$$G_n - (1+r)G_{n-1} = -A, \quad n \geq 1.$$

Here we guess a particular solution of the form  $G_n = \alpha$ . We get by insertion (i.e. testing this solution) that

$$G_n - (1+r)G_{n-1} = \alpha - (1+r)\alpha = -r\alpha = -A,$$

and a particular solution is the constant sequence

$$G_n = \alpha = \frac{A}{r}, \quad n \in \mathbb{N}_0.$$

Since the corresponding homogeneous equation has the solution  $c \cdot (1+r)^n$ , the complete solution of the inhomogeneous equation is given by

$$G_n = \frac{A}{r} + c \cdot (1+r)^n, \quad n \in \mathbb{N}_0, \quad c \in \mathbb{R}.$$

For  $n = 0$  we get the condition

$$G_0 = \frac{A}{r} + c, \quad \text{i.e.} \quad c = G_0 - \frac{A}{r},$$

and the wanted solution becomes

$$G_n = \frac{A}{r} + \left(G_0 - \frac{A}{r}\right) \cdot (1+r)^n, \quad n \in \mathbb{N}_0.$$

- 2) The debt will be paid back, if and only if  $G_n$  at some time becomes  $\leq 0$ . This means that  $G_0 - \frac{A}{r} < 0$ , hence

$$A > r \cdot G_0,$$

which is only expressing the reasonable fact that the payment must be bigger than the interest in one settling period of the original loan.

**Example 5.8** Let  $G_0$  and  $A$  be given, and assume that  $A$  is sufficiently large to assure that the loan will be paid. Find a formula for the number of settling periods which is needed to pay the debt (thus the smallest number  $n$  of settling periods for which  $G_n \leq 0$ .)

A. A continuation of Example 5.7.

D. Apply the solution of Example 5.7.

I. According to Example 5.7 the remaining debt  $G_n$  is given by

$$G_n = \frac{A}{r} + \left(G_0 - \frac{A}{r}\right) \cdot (1+r)^n, \quad n \in \mathbb{N}_0,$$

where we must assume that  $G_0 - \frac{A}{r} < 0$ , i.e.  $A > r \cdot G_0$ .

We shall find the smallest  $n \in \mathbb{N}_0$ , for which  $G_n \leq 0$ , i.e. the smallest  $n \in \mathbb{N}_0$ , for which

$$\left(\frac{A}{r} - G_0\right) \cdot (1+r)^n \geq \frac{A}{r}, \quad \text{i.e.} \quad (1+r)^n \geq \frac{A}{A - r \cdot G_0}.$$

We get by taking the logarithm that

$$n \geq \frac{\ln A - \ln(A - r \cdot G_0)}{\ln(1+r)}.$$

**Example 5.9** Let the number of settling periods be fixed to  $N$ . Find a formula for the (constant) payment, by which the debt is paid in precisely  $N$  settling periods.

A. A continuation of Example 5.8.

D. Apply the solution of Example 5.8.

I. If  $A > r \cdot G_0$ , we see from Example 5.8 that we shall find  $A$ , such that

$$N = \frac{\ln A - \ln(A - r \cdot G_0)}{\ln(1+r)} = -\frac{\ln\left(\frac{A - r \cdot G_0}{A}\right)}{\ln(1+r)} = -\frac{\ln\left(1 - \frac{rG_0}{A}\right)}{\ln(1+r)},$$

which we rewrite as

$$\ln\left(1 - \frac{rG_0}{A}\right) = -N \ln(1+r) = \ln\{(1+r)^{-N}\}.$$

We get from here the condition

$$(1+r)^{-N} = 1 - \frac{rG_0}{A}, \quad \text{i.e.} \quad \frac{rG_0}{A} = 1 - (1+r)^{-N},$$

hence

$$A = G_0 \cdot \frac{r}{1 - (1+r)^{-N}} = G_0 \cdot \frac{r(1+r)^N}{(1+r)^N - 1} = G_0 \cdot \frac{(1+r)^{N+1} - (1+r)^N}{(1+r)^N - 1}.$$

**Example 5.10** Assume that  $G_0$  is 100 000 euro and that the annual interest is 9 % and that there are 4 settling periods (quarters) per year. When is the loan repaid if the payment is 3 000 euro per quarter? And when is the loan repaid, if we double the payment?

A. A continuation of the Examples 5.7–5.9.


D. Apply the results from Examples 5.7–5.9.

I. First calculate

$$G_0 = 100\,000, \quad r = \frac{9}{400} \quad \text{and} \quad A = 3\,000.$$


Please click the advert

**Student  
Discounts**




+

**Student  
Events**




+


**Money  
Saving Advice**



=

**Happy  
Days!**





We get

$$rG_0 = \frac{9}{400} \cdot 100\,000 = 9 \cdot 250 = 2\,250 < 3\,000 = A,$$

which guarantees that the loan will be repaid with 3 000 euro in payment per settling period, cf. Example 5.7.

It follows from Example 5.9 that

$$n \geq \frac{\ln A - \ln(A - rG_0)}{\ln(1 + r)} = \frac{\ln 3000 - \ln 750}{\ln\left(1 + \frac{9}{400}\right)} = \frac{\ln 4}{\ln \frac{409}{400}} \approx 62,3,$$

thus the loan is repaid after 63 settling periods, corresponding to  $15\frac{3}{4}$  years.

When  $A$  is doubled to 6 000 euro, we get  $A - rG_0 = 3\,750$ , hence

$$n \geq \frac{\ln A - \ln(A - rG_0)}{\ln(1 + r)} = \frac{\ln \frac{6000}{3750}}{\ln \frac{409}{400}} \approx 21,12,$$

and the loan is repaid after (only) 22 settling periods, corresponding to  $5\frac{1}{2}$  år.

**Example 5.11** Assume that  $G_0$  is 100 000 euro and that the annual interest is 9 % and that the payments are quarterly. How big shall we choose the payment, if the loan is repaid after 20 and 30 years, respectively?

A. A continuation of the Examples 5.7-5.10.

D. Use the previous results from Example 5.9.

I. Here  $G_0 = 100\,000$  and  $r = \frac{9}{400}$ . In the first case,  $N = 4 \cdot 20 = 80$ , and in the second case is  $N = 4 \cdot 30 = 120$ . It follows from Example 5.9 that

$$A = \frac{rG_0(1+r)^N}{(1+r)^N - 1} = \frac{rG_0}{1 - (1+r)^{-N}}.$$

1) If  $N = 80$ , then

$$A = \frac{\frac{9}{400} \cdot 100\,000}{1 - \left(\frac{400}{409}\right)^{80}} = \frac{2250}{1 - \left(\frac{400}{409}\right)^{80}} = 2\,706,38 \text{ euro.}$$

2) Når  $N = 120$ , er

$$A = \frac{2250}{1 - \left(\frac{400}{409}\right)^{120}} = 2\,417,40 \text{ euro}$$

**Example 5.12** Find that solution of the difference equation

$$x_k + 2x_{k-1} = \cos\left(\frac{\pi}{2}k\right), \quad k \geq 1,$$

for which  $x_0 = 0$ .

**A** Linear, inhomogeneous difference equation of first order.

**D.** Start by finding the solution of the homogeneous equation. Then analyze the right hand side (guess a complex solution).

**I.** The characteristic polynomial  $R + 2$  has the root  $R = -2$ , so the complete solution of the homogeneous equation is given by

$$x_k = c \cdot (-2)^k, \quad k \in \mathbb{N}_0, \quad c \in \mathbb{R}.$$

Now,  $\cos\left(\frac{\pi}{2}k\right) = \operatorname{Re}\{i^k\}$ , so if we insert  $x_k = \alpha i^k$ , we get

$$x_k + 2x_{k-1} = \alpha i^k + 2\alpha i^{k-1} = \alpha(1 - 2i)i^k,$$

which is equal to  $i^k$ , if

$$\alpha = \frac{1}{1 - 2i} = \frac{1 + 2i}{5}.$$

Thus, a particular solution is

$$x_k = \operatorname{Re}\left\{\frac{1 + 2i}{5}i^k\right\} = \frac{1}{5}\operatorname{Re}\{i^k + 2i^{k+1}\} = \frac{1}{5}\cos\left(k \cdot \frac{\pi}{2}\right) + \frac{2}{5}\cos\left((k + 1)\frac{\pi}{2}\right),$$

and the complete solution becomes

$$x_k = \frac{1}{5}\cos\left(k \cdot \frac{\pi}{2}\right) + \frac{2}{5}\cos\left((k + 1)\frac{\pi}{2}\right) + c \cdot (-2)^k.$$

It follows from the initial condition that

$$x_0 = 0 = \frac{1}{5} + 0 + c, \quad \text{i.e.} \quad c = -\frac{1}{5}.$$

The wanted solution becomes

$$\begin{aligned} x_k &= \frac{1}{5}\left\{(-2)^k + \cos\left(\frac{\pi}{2}k\right) + 2\cos\left(\frac{\pi}{2}(k + 1)\right)\right\} \\ &= \frac{1}{5}\left\{(-2)^k + \cos\left(\frac{\pi}{2}k\right) - 2\sin\left(\frac{\pi}{2}k\right)\right\}, \quad k \in \mathbb{N}_0. \end{aligned}$$



**Example 5.13** Let  $a_n = 1 + 2 + \cdots + n$ ,  $n \geq 1$ . Find a difference equation which is fulfilled by  $a_n$ . Then find a formula for  $a_n$ .

A. Establishment and solution of a difference equation.

D. Look at  $a_n - a_{n-1}$ .

I. Obviously,

$$a_n - a_{n-1} = n, \quad n \geq 1.$$

The corresponding homogeneous equation has the constant solution

$$a_n = c, \quad n \in \mathbb{N}_0, \quad c \in \mathbb{R}.$$

Then we guess the structure  $a_n = \alpha n^2 + \beta n$ . By insertion,

$$\begin{aligned} a_n - a_{n-1} &= \alpha \{n^2 - (n-1)^2\} + \beta \{n - (n-1)\} \\ &= \alpha(2n-1) + \beta = 2\alpha n + (\beta - \alpha) = n, \end{aligned}$$

thus  $\alpha = \frac{1}{2}$  and  $\beta = \alpha = \frac{1}{2}$ . The complete solution becomes

$$a_n = \frac{1}{2}n^2 + \frac{1}{2}n + c = \frac{1}{2}n(n+1) + c, \quad n \in \mathbb{N}_0, \quad c \in \mathbb{R}.$$

Since  $a_1 = 1 = \frac{1}{2} \cdot 1 \cdot 2 + c = 1 + c$ , we have  $c = 0$ , and the searched solution is

$$a_n = \frac{1}{2}n(n+1), \quad n \in \mathbb{N}_0.$$

**Example 5.14** Let  $a_n = 1 + 2^2 + \cdots + n^2$ ,  $n \geq 1$ . Find a difference equation which is fulfilled by  $a_n$ . Then find a formula for  $a_n$ .

A. Establish a (simple) difference equation.

D. Find such a difference equation for  $a_n$ , and solve it.

I. It is immediately seen that

$$a_n - a_{n-1} = n^2.$$

The corresponding homogeneous equation has the constant sequence  $a_n = c$ ,  $c \in \mathbb{R}$ , as a solution. Then we guess a particular solution of the form

$$a_n = \alpha n^3 + \beta n^2 + \gamma n,$$

hence by insertion,

$$\begin{aligned} a_n - a_{n-1} &= \alpha \{n^3 - (n-1)^3\} + \beta \{n^2 - (n-1)^2\} + \gamma \{n - (n-1)\} \\ &= \alpha \{3n^2 - 3n + 1\} + \beta \{2n - 1\} + \gamma \\ &= 3\alpha n^2 + (-3\alpha + 2\beta)n + (\alpha - \beta + \gamma). \end{aligned}$$

This expression is equal to  $n^2$ , if and only if

$$\begin{cases} 3\alpha = 1, \\ -3\alpha + 2\beta = 0, \\ \alpha - \beta + \gamma = 0, \end{cases} \quad \text{i.e.} \quad \begin{cases} \alpha = \frac{1}{3}, \\ \beta = \frac{1}{2}, \\ \gamma = \beta - \alpha = \frac{1}{6}. \end{cases}$$

A particular solution is then

$$a_n = \frac{1}{3}n^3 + \frac{1}{2}n^2 + \frac{1}{6}n = \frac{1}{6}n(2n^2 + 3n + 1) = \frac{1}{6}n(2n + 1)(n + 1).$$

Since  $a_1 = \frac{1}{6} \cdot 1 \cdot (2 + 3 + 1) = 1$ , we see that this is in fact the wanted solution, so

$$a_n = \frac{1}{6}n(n + 1)(2n + 1), \quad n \in \mathbb{N}.$$

The complete solution is of course

$$a_n = \frac{1}{6}n(n + 1)(2n + 1) + c, \quad n \in \mathbb{N}, \quad c \in \mathbb{R}.$$

Please click the advert

## WHAT'S MISSING IN THIS EQUATION?

You could be one of our future talents

### MAERSK INTERNATIONAL TECHNOLOGY & SCIENCE PROGRAMME

Are you about to graduate as an **engineer** or **geoscientist**? Or have you already graduated?  
If so, there may be an exciting future for you with A.P. Moller - Maersk.



**MAERSK**

[www.maersk.com/mitas](http://www.maersk.com/mitas)

**Example 5.15** Find the complete solution of the following difference equations

- (1)  $x_k - 5x_{k-1} + 6x_{k-2} = 0, \quad k \geq 2,$
- (2)  $x_k - 6x_{k-1} + 9x_{k-2} = 0, \quad k \geq 2,$
- (3)  $x_k + 2x_{k-1} + 2x_{k-2} = 0, \quad k \geq 2.$

**A.** Linear homogeneous difference equations of second order.

**D.** Find the roots of the characteristic polynomials and apply the solution formula.

**I.** 1) The characteristic polynomial  $R^2 - 5R + 6$  has the simple roots  $R = 2$  and  $R = 3$ , hence the complete solution is

$$x_k = c_1 \cdot 2^k + c_2 \cdot 3^k, \quad k \in \mathbb{N}_0, \quad c_1, c_2 \in \mathbb{R}.$$

2) The characteristic polynomial  $R^2 - 6R + 9$  has the double root  $R = 3$ , hence the complete solution is

$$x_k = c_1 \cdot 3^k + c_2 \cdot k \cdot 3^k, \quad k \in \mathbb{N}_0, \quad c_1, c_2 \in \mathbb{R}.$$

3) The characteristic polynomial  $R^2 + 2R + 2$  has the two complex conjugated roots

$$R = -1 \pm i = \sqrt{2} \exp\left(\pm i \frac{3\pi}{4}\right),$$

hence the complete solution is given by

$$x_k = c_1 (\sqrt{2})^k \cos\left(\frac{3\pi}{4} k\right) + c_2 (\sqrt{2})^k \sin\left(\frac{3\pi}{4} k\right), \quad k \in \mathbb{N}_0,$$

where  $c_1, c_2 \in \mathbb{R}$  are arbitrary constants.

**Example 5.16** Find in each of the following cases that solution of the difference equation which also satisfies the given initial condition.

- (1)  $x_k - 7x_{k-1} + 10x_{k-2} = 0, \quad k \geq 2, \quad x_0 = 3, x_1 = 15.$
- (2)  $9x_k + 12x_{k-1} + 4x_{k-2} = 0, \quad k \geq 2, \quad x_0 = 1, x_1 = 4.$
- (3)  $x_k + 4x_{k-2} = 0, \quad k \geq 2, \quad x_0 = x_1 = 1.$

**A.** Linear homogeneous difference equations of second order with given initial conditions.

**D.** Find the roots of the characteristic polynomials and apply some convenient solution formula. Then insert into the initial conditions.

**I.** 1) The characteristic polynomial  $R^2 - 7R + 10$  has the two simple roots  $R = 2$  and  $R = 5$ , hence the complete solution is

$$x_k = c_1 \cdot 2^k + c_2 \cdot 5^k, \quad k \in \mathbb{N}_0, \quad c_1, c_2 \in \mathbb{R}.$$

It follows from the initial conditions that

$$\begin{cases} x_0 = 3 = c_1 + c_2, \\ x_1 = 15 = 2c_1 + 5c_2, \end{cases} \quad \text{i.e.} \quad \begin{cases} 2c_1 + 2c_2 = 6, \\ 2c_1 + 5c_2 = 15, \end{cases}$$

thus  $3c_2 = 15 - 6 = 9$ , i.e.  $c_2 = 3$  and  $c_1 = 0$ . The wanted solution is

$$x_k = 3 \cdot 5^k, \quad k \in \mathbb{N}_0.$$

- 2) The characteristic polynomial  $9R + 12R + 4 = (3R + 2)^2$  has the double root  $R = -\frac{2}{3}$ , hence the complete solution is

$$x_k = c_1 \left(-\frac{2}{3}\right)^k + c_2 \cdot k \left(-\frac{2}{3}\right)^k, \quad k \in \mathbb{N}_0, \quad c_1, c_2 \in \mathbb{R}.$$

It follows from the initial conditions that

$$x_0 = 1 = c_1 \quad \text{and} \quad x_1 = 4 = -\frac{2}{3}(c_1 + c_2),$$

thus  $c_1 = 1$  and  $c_1 + c_2 = -6$ , i.e.  $c_2 = -7$ . The wanted solution is

$$x_k = (1 - 7k) \cdot \left(-\frac{2}{3}\right)^k, \quad k \in \mathbb{N}_0.$$

- 3) The characteristic polynomial  $R^2 + 4$  has the two complex conjugated roots

$$R = \pm 2i = 2 \exp\left(\pm i \frac{\pi}{2}\right).$$

Hence, the complete solution is

$$x_k = c_1 \cdot 2^k \cos\left(\frac{\pi}{2} k\right) + c_2 \cdot 2^k \sin\left(\frac{\pi}{2} k\right), \quad k \in \mathbb{N}_0,$$

where  $c_1, c_2 \in \mathbb{R}$  are arbitrary constants.

It follows from the initial conditions that

$$x_0 = 1 = c_1 \quad \text{and} \quad x_1 = 1 = 2c_2, \quad \text{i.e.} \quad c_2 = \frac{1}{2}.$$

Thus, the wanted solution becomes

$$x_k = 2^k \left\{ \cos\left(\frac{\pi}{2} k\right) + \frac{1}{2} \sin\left(\frac{\pi}{2} k\right) \right\}, \quad k \in \mathbb{N}_0.$$

**Example 5.17** Find the complete solution of the difference equation

$$x_k + 4x_{k-1} + 4x_{k-2} = 7, \quad k \geq 2.$$

- A. Linear inhomogeneous difference equation of second order.
- D. Find the roots of the characteristic polynomial and apply the solution formula when solving the homogeneous equation. Finally, guess the structure of a particular solution and apply the linearity.
- I. We guess a particular solution as a constant sequence,  $x_k = c$ . It is seen by insertion that  $x_k = \frac{7}{9}$ ,  $k \in \mathbb{N}_0$ , is a particular solution.

The characteristic polynomial  $R^2 + 4R + 4 = (R + 2)^2$  has the double root  $R = -2$ , hence the complete solution becomes

$$x_k = \frac{7}{9} + c_1(-2)^k + c_2k(-2)^k, \quad k \in \mathbb{N}_0, \quad c_1, c_2 \in \mathbb{R}.$$

**Example 5.18** Find that solution of the difference equation

$$x_k + 2x_{k-1} + 2x_{k-2} = 5^k, \quad k \geq 2,$$

for which  $x_0 = x_1 = \frac{1}{5}$ .

- A. Linear inhomogeneous difference equation of second order with initial conditions.
- D. Find the roots of the characteristic polynomial and apply a solution formula for the homogeneous equation. Then guess the structure of a particular solution and exploit the linearity. Insert finally into the initial conditions and find the constants.
- I. The characteristic polynomial  $R^2 + 2R + 2$  has the two complex conjugated roots

$$R = -1 \pm i = \sqrt{2} \exp\left(\pm \frac{3\pi}{4} i\right).$$

The complete solution of the homogeneous equation is

$$x_k = c_1(\sqrt{2})^k \cos\left(\frac{3\pi}{4} k\right) + c_2(\sqrt{2})^k \sin\left(\frac{3\pi}{4} k\right), \quad k \in \mathbb{N}_0,$$

where  $c_1, c_2 \in \mathbb{R}$  are arbitrary constants.

Then we guess a particular solution of the structure  $x_k = \alpha \cdot 5^k$ . We get by insertion

$$x_k + 2x_{k-1} + 2x_{k-2} = \alpha (5^k + 2 \cdot 5^{k-1} + 2 \cdot 5^{k-2}) = \frac{\alpha}{25} (25 + 10 + 2) \cdot 5^k = \frac{37}{25} \alpha \cdot 5^k.$$

This expression is equal to  $5^k$ , if  $\alpha = \frac{25}{37}$ , thus the complete solution becomes

$$x_k = \frac{25}{37} 5^k + c_1(\sqrt{2})^k \cos\left(\frac{3\pi}{4} k\right) + c_2(\sqrt{2})^k \sin\left(\frac{3\pi}{4} k\right), \quad k \in \mathbb{N}_0,$$

where  $c_1$  and  $c_2 \in \mathbb{R}$  are arbitrary constants.

It follows from the initial conditions that

$$x_0 = \frac{1}{5} = \frac{25}{37} + c_1,$$

hence

$$c_1 = \frac{1}{5} - \frac{25}{37} = \frac{37 - 125}{185} = -\frac{88}{185},$$

and

$$x_1 = \frac{1}{5} = \frac{125}{37} - c_1 \frac{\sqrt{2}}{\sqrt{2}} + c_2 \frac{\sqrt{2}}{\sqrt{2}} = \frac{125}{37} - c_1 + c_2,$$

whence

$$c_2 = \frac{1}{5} + \frac{1}{5} - \frac{25}{37} - \frac{125}{37} = \frac{2}{5} - \frac{150}{37} = \frac{74 - 750}{185} = -\frac{676}{185}.$$

The wanted solution is therefore

$$x_k = \frac{25}{37} \cdot 5^k - \frac{88}{185} (\sqrt{2})^k \cos\left(\frac{3\pi}{4} k\right) - \frac{676}{185} (\sqrt{2})^k \sin\left(\frac{3\pi}{4} k\right), \quad k \in \mathbb{N}_0.$$

Please click the advert

# CHALLENGE YOURSELF

## WWW.STUDYINSWEDEN.SE

Today's job market values ambitious, innovative, perceptive team players. Swedish universities foster these qualities through a forward-thinking culture where you're close to the latest ideas and global trends.

**Si.**  
Swedish Institute

Whatever your career goals may be, studying in Sweden will give you valuable skills and a competitive advantage for your future. [www.studyinsweden.se](http://www.studyinsweden.se)

**Example 5.19** Find that solution of the difference equation

$$x_k + 3x_{k-1} + 2x_{k-2} = 3^k, \quad k \geq 2,$$

for which  $x_0 = 0$  and  $x_1 = 0$ .

- A.** Linear inhomogeneous difference equation of second order with initial conditions.
- D.** Find the roots of the characteristic polynomial and apply a solution formula for the complete solution of the homogeneous equation. Then guess the structure of a particular solution and exploit the linearity. Insert finally into the final conditions and find the constants.
- I.** The characteristic polynomial  $R^2 + 3R + 2$  has the two simple roots  $R = -1$  and  $R = -2$ , hence the complete solution of the homogeneous difference equation becomes

$$x_k = c_1(-1)^k + c_2(-2)^k, \quad k \in \mathbb{N}_0, \quad c_1, c_2 \in \mathbb{R}.$$

Then we guess on a particular solution of the structure  $x_k = \alpha \cdot 3^k$ . By insertion into the equation we get

$$\alpha \{3^k + 3^k + 2 \cdot 3^{k-2}\} = \alpha \left(2 + \frac{2}{9}\right) 3^k = \frac{20}{9} \alpha \cdot 3^k,$$

which is equal to  $3^k$  for  $\alpha = \frac{9}{20}$ . Thus the complete solution is

$$x_k = \frac{9}{20} \cdot 3^k + c_1(-1)^k + c_2(-2)^k, \quad k \in \mathbb{N}_0, \quad c_1, c_2 \in \mathbb{R}.$$

Then we get by the final conditions,

$$\begin{cases} x_0 = 0 = \frac{9}{20} + c_1 + c_2, \\ x_1 = 0 = \frac{27}{20} - c_1 - 2c_2, \end{cases}$$

whence

$$c_2 = \frac{27}{20} + \frac{9}{20} = \frac{36}{20} = \frac{9}{5},$$

and

$$c_1 = -\frac{9}{20} - c_2 = -\frac{9}{20} - \frac{9}{5} = -\frac{45}{20} = -\frac{9}{4}.$$

The wanted solution is therefore

$$x_k = \frac{9}{20} \cdot 3^k - \frac{9}{4} (1-)^k + \frac{9}{5} (-2)^k, \quad k \in \mathbb{N}_0.$$

**Example 5.20** Find the complete solution of the difference equations

$$(1) \quad x_k - x_{k-2} = \sin\left(k \cdot \frac{\pi}{2}\right), \quad k \geq 2,$$

$$(2) \quad x_k - x_{k-2} = \cos\left(k \cdot \frac{\pi}{2}\right), \quad k \geq 2.$$

**A.** Linear inhomogeneous difference equations of second order.

**D.** Find the roots of the characteristic equation and apply a solution formula for the solution of the homogeneous difference equation. Then try to make a complex guess of a particular solution.

**I.** Since  $\sin\left(k \cdot \frac{\pi}{2}\right) = \operatorname{Im}(i^k)$ , and  $\cos\left(k \cdot \frac{\pi}{2}\right) = \operatorname{Re}(i^k)$ , we can solve both problems at the same time, until we at last are forced to split into the real and the imaginary part.

The characteristic polynomial  $R^2 - 1$  has the two simple roots  $R = \pm 1$ , hence the complete solution of the homogeneous equation becomes

$$x_k = c_1 + c_2(-1)^k, \quad k \in \mathbb{N}_0, \quad c_1, c_2 \in \mathbb{R}.$$

Next insert  $x_k = \alpha i^k$ . We get

$$x_k - x_{k-2} = \alpha \{i^k - i^{k-2}\} = 2\alpha i^k,$$

which is equal to  $i^k$  for  $\alpha = \frac{1}{2}$ .

1) The complete solution of

$$x_k - x_{k-2} = \sin\left(k \cdot \frac{\pi}{2}\right) = \operatorname{Im}(i^k)$$

is

$$x_k = \operatorname{Im}\left(\frac{1}{2}i^k\right) + c_1 + c_2(-1)^k = \frac{1}{2} \sin\left(k \cdot \frac{\pi}{2}\right) + c_1 + c_2(-1)^k, \quad k \in \mathbb{N}_0, \quad c_1, c_2 \in \mathbb{R}.$$

2) The complete solution of

$$x_k - x_{k-2} = \cos\left(k \cdot \frac{\pi}{2}\right) = \operatorname{Re}(i^k)$$

is

$$x_k = \operatorname{Re}\left(\frac{1}{2}i^k\right) + c_1 + c_2(-1)^k = \frac{1}{2} \cos\left(k \cdot \frac{\pi}{2}\right) + c_1 + c_2(-1)^k, \quad k \in \mathbb{N}_0, \quad c_1, c_2 \in \mathbb{R}.$$



**Example 5.21** Find that solution of the difference equation

$$x_k - 6x_{k-1} + 9x_{k-2} = 3 \cdot 2^k + 17 \cdot 4^k, \quad k \geq 2,$$

for which  $x_0 = 40$  and  $x_1 = 400$ .

**A.** Linear inhomogeneous difference equation of second order with initial conditions.

**D.** Solve the characteristic equation; guess a particular solution.

**I.** The characteristic polynomial  $R^2 - 6R + 9 = (R - 3)^2$  has the double root  $R = 3$ , hence the homogeneous equation has the complete solution

$$x_k = c_1 3^k + c_2 k \cdot 3^k, \quad k \in \mathbb{N}_0, \quad c_1, c_2 \in \mathbb{R}.$$

By guessing the structure  $x_k = a \cdot 2^k + b \cdot 4^k$ , we get by insertion (i.e. checking this possible solution)

$$\begin{aligned} x_k - 6x_{k-1} + 9x_{k-2} &= a \cdot 2^k + b \cdot 4^k - 6a \cdot 2^{k-1} - 6b \cdot 4^{k-1} + 9a \cdot 2^{k-2} + 9b \cdot 4^{k-2} \\ &= a \left(1 - 3 + \frac{9}{4}\right) 2^k + b \left(1 - \frac{3}{2} + \frac{9}{16}\right) 4^k = \frac{a}{4} \cdot 2^k + \frac{b}{16} \cdot 4^k. \end{aligned}$$

This expression is equal to  $3 \cdot 2^k + 17 \cdot 4^k$ , if  $a = 12$  and  $b = 16 \cdot 17 = 272$ , hence the complete solution becomes

$$x_k = 12 \cdot 2^k + 272 \cdot 4^k + c_1 \cdot 3^k + c_2 k \cdot 3^k, \quad k \in \mathbb{N}_0, \quad c_1, c_2 \in \mathbb{R}.$$

By insertion into the conditions we get

$$x_0 = 40 = 12 + 272 + c_1 = 284 + c_1,$$

thus  $c_1 = -244$ , and

$$x_1 = 400 = 24 + 1088 + 3c_1 + 3c_2 = 1112 - 732 + 3c_2 = 380 + 3c_2,$$

i.e.  $c_2 = \frac{20}{3}$ . The solution is

$$x_k = 12 \cdot 2^k + 272 \cdot 4^k - 244 \cdot 3^k + \frac{20}{3} k \cdot 3^k, \quad k \in \mathbb{N}_0.$$

**Example 5.22** Find the complete solution of the difference equations

$$(1) \quad x_k - 2x_{k-1} + x_{k-2} - 2x_{k-3} = 0, \quad k \geq 3,$$

$$(2) \quad x_k - 2x_{k-1} - x_{k-2} + 2x_{k-3} = 0, \quad k \geq 3,$$

$$(3) \quad x_k - x_{k-4} = 0, \quad k \geq 4.$$

**A.** Two linear homogeneous difference equations of third order, and an homogeneous difference equation of fourth order.

**D.** Find the roots of the characteristic polynomials and then apply a solution formula.

**I.** 1) The characteristic polynomial

$$R^3 - 2R^2 + R - 2 = (R - 2)(R^2 + 1)$$

has the simple roots  $R = 2$  and  $R = \pm i = \exp\left(\pm i \frac{\pi}{2}\right)$ , thus all (real) solutions are

$$x_k = c_1 \cdot 2^k + c_2 \cos\left(k \cdot \frac{\pi}{2}\right) + c_3 \sin\left(k \cdot \frac{\pi}{2}\right), \quad k \in \mathbb{N}_0, \quad c_1, c_2, c_3 \in \mathbb{R}.$$

Please click the advert

The advertisement features a collage of four images. The top-left image shows a person in a white shirt sitting at a desk with multiple computer monitors. The top-right image shows two women in professional attire; one is wearing a pink shirt and the other a white turtleneck, both holding documents and appearing to be in a meeting. The bottom-left image shows a modern, multi-story building with many lit windows at night. The bottom-right image shows a man in a dark suit holding a document. The entire advertisement is set against a dark blue background with a light blue wavy graphic at the bottom.

[www.job.oticon.dk](http://www.job.oticon.dk)

**oticon**  
PEOPLE FIRST

Download free books at [BookBooN.com](http://BookBooN.com)

2) The characteristic polynomial

$$R^3 - 2R^2 - R + 2 = (R - 2)(R^2 - 1) = (R - 2)(R - 1)(R + 1)$$

has the three simple roots  $R = 2$  and  $R = \pm 1$ , hence the complete solution is

$$x_k = c_1 \cdot 2^k + c_2 + c_3 (-1)^k, \quad k \in \mathbb{N}_0, \quad c_1, c_2, c_3 \in \mathbb{R}.$$

3) The characteristic polynomial

$$R^4 - 1 = (R - 1)(R + 1)(R - i)(R + i)$$

has the four simple roots  $R = \pm 1$  and  $R = \pm i$ , hence all (real) solutions are

$$x_k = c_1 0 c_2 (-1)^k + c_3 \cos\left(k \cdot \frac{\pi}{2}\right) + c_4 \sin\left(k \cdot \frac{\pi}{2}\right), \quad k \in \mathbb{N}_0,$$

where  $c_1, c_2, c_3, c_4 \in \mathbb{R}$  are arbitrary constants.

**Example 5.23** Find that solution of the difference equation

$$x_k - x_{k-1} + 4x_{k-2} - 4x_{k-3} = 0, \quad k \geq 3,$$

for which  $x_0 = -1, x_2 = 2, x_4 = 4$ .

- A.** Linear homogeneous difference equation of third order with three (non-successive) conditions.  
**D.** Find the roots of the characteristic polynomial and apply the solution formula. Finally, insert into the conditions.  
**I.** The characteristic polynomial

$$R^3 - R^2 + 4R - 4 = (R - 1)(R^2 + 4)$$

has the three simple roots  $R = 1$  and  $R = \pm 2i$ . Hence, the complete solution is

$$x_k = c_1 + c_2 2^k \cos\left(k \cdot \frac{\pi}{2}\right) + c_3 2^k \sin\left(k \cdot \frac{\pi}{2}\right).$$

Then by insertion into the conditions,

$$\begin{cases} x_0 = -1 = c_1 + c_2, \\ x_1 = 2 = c_1 + 2c_3, \\ x_4 = 4 = c_1 + 16c_2, \end{cases}$$

from which we get  $15c_2 = 5$ , thus  $c_2 = \frac{1}{3}$ , and  $c_1 = -\frac{4}{3}$ . Then finally

$$2c_3 = 2 + \frac{4}{3}, \quad \text{i.e.} \quad c_3 = 1 + \frac{2}{3} = \frac{5}{3}.$$

The wanted solution is

$$x_k = -\frac{4}{3} + \frac{1}{3} \cdot 2^k \cos\left(k \cdot \frac{\pi}{2}\right) + \frac{5}{3} \cdot 2^k \sin\left(k \cdot \frac{\pi}{2}\right), \quad k \in \mathbb{N}_0.$$

**Example 5.24** Find the complete solution of the difference equation

$$x_k - 2x_{k-1} + x_{k-2} - 2x_{k-3} = 4, \quad k \geq 3.$$

- A.** Linear inhomogeneous difference equation of fourth order. The corresponding homogeneous difference equation is treated in Example 5.22 (1).
- D.** Find the roots of the characteristic polynomial; then guess a solution of the inhomogeneous equation.
- I.** The characteristic polynomial

$$R^3 - 2R^2 + R - 2 = (R - 2)(R^2 + 1)$$

has the three simple roots  $R = 2$  and  $R = \pm i$ . It is seen by inspection that  $x_k = -2$ ,  $k \in \mathbb{N}_0$ , is a particular solution. Hence the complete solution is

$$x_k = -2 + c_1 \cdot 2^k + c_2 \cos\left(k \cdot \frac{\pi}{2}\right) + c_3 \sin\left(k \cdot \frac{\pi}{2}\right), \quad k \in \mathbb{N}_0,$$

where  $c_1, c_2, c_3 \in \mathbb{R}$  are arbitrary constants.

**Example 5.25** Find the complete solution of the difference equation

$$x_k - 2x_{k-1} - x_{k-2} + 2x_{k-3} = -2, \quad k \geq 3.$$

- A.** Linear inhomogeneous difference equation of third order. The corresponding homogeneous equation was dealt with in Example 5.22 (2).
- D.** Find the roots of the characteristic polynomial; then guess a solution of the inhomogeneous equation.
- I.** The characteristic polynomial

$$R^3 - 2R^2 - R + 2 = (R - 2)(R - 1)(R + 1)$$

has the three simple roots  $R = 2$  and  $R = \pm 1$ . Since already  $R = 1$  is a root, corresponding to the solution  $x_k = c$ ,  $k \in \mathbb{N}_0$ , of the homogeneous equation, our guess must be modified, so we guess a particular solution of the form  $x_k = a \cdot k$ . We get by insertion,

$$\begin{aligned} x_k - 2x_{k-1} - x_{k-2} + 2x_{k-3} &= a\{k - 2(k-1) - (k-2) + 2(k-3)\} \\ &= a\{k - 2k + 2 - k + 2 + 2k - 6\} = -2a, \end{aligned}$$

which is equal to  $-2$  for  $a = 1$ . Hence, the complete solution is given by

$$x_k = k + c_1 + c_2(-1)^k + c_3 \cdot 2^k, \quad k \in \mathbb{N}_0, \quad c_1, c_2, c_3 \in \mathbb{R}.$$

**Example 5.26** Find the complete solution of the difference equations

$$(1) \quad x_k + x_{k-2} - 2x_{k-4} = \cos\left(k \cdot \frac{\pi}{2}\right), \quad k \geq 4.$$

$$(2) \quad x_k + x_{k-2} - 2x_{k-4} = \sin\left(k \cdot \frac{\pi}{2}\right), \quad k \geq 4.$$

**A.** Linear inhomogeneous difference equation of fourth order with two different right hand sides.

**D.** Find the roots of the characteristic polynomial. Then make a complex guess, when the right hand side is replaced by  $i^k$ . Then the two questions are answered by taking the real and the imaginary part of the complex solution.

**I.** The characteristic polynomial

$$R^4 + R^2 - 2 = (R^2 + 2)(R^2 - 1)$$

has the four simple roots  $R = \pm 1$  and  $R = \pm i\sqrt{2}$ , hence the homogeneous equation has the complete solution,

$$x_k = c_1 + c_2(-1)^k + c_3(\sqrt{2})^k \cos\left(k \cdot \frac{\pi}{2}\right) + c_4(\sqrt{2})^k \sin\left(k \cdot \frac{\pi}{2}\right), \quad k \in \mathbb{N}_0,$$

where  $c_1, c_2, c_3, c_4 \in \mathbb{R}$  are arbitrary constants.

If we guess of a complex solution  $x_k = \alpha i^k$ , we get by insertion

$$\begin{aligned} x_k + x_{k-2} - 2x_{k-4} &= \alpha \{i^k + i^{k-2} - 2i^{k-4}\} \\ &= \alpha i^k (1 - 1 - 2) = -2\alpha i^k, \end{aligned}$$

which is equal to  $i^k$  for  $\alpha = -\frac{1}{2}$ . Hence the complex equation has the complete solution

$$x_k = -\frac{1}{2} i^k + c_1 + c_2(-1)^k + c_3(\sqrt{2})^k \cos\left(k \cdot \frac{\pi}{2}\right) + c_4(\sqrt{2})^k \sin\left(k \cdot \frac{\pi}{2}\right), \quad k \in \mathbb{N}_0,$$

where  $c_1, c_2, c_3, c_4 \in \mathbb{R}$  are arbitrary constants.

1) By taking the real part of the solution of the complex solution we get the solution of (1),

$$x_k = -\frac{1}{2} \cos\left(k \cdot \frac{\pi}{2}\right) + c_1 + c_2(-1)^k + c_3(\sqrt{2})^k \cos\left(k \cdot \frac{\pi}{2}\right) + c_4(\sqrt{2})^k \sin\left(k \cdot \frac{\pi}{2}\right),$$

where  $k \in \mathbb{N}_0$ , and where  $c_1, c_2, c_3, c_4 \in \mathbb{R}$  are arbitrary constants.

2) By taking the imaginary part of the complex solution, we get the solution of (2),

$$x_k = -\frac{1}{2} \sin\left(k \cdot \frac{\pi}{2}\right) + c_1 + c_2(-1)^k + c_3(\sqrt{2})^k \cos\left(k \cdot \frac{\pi}{2}\right) + c_4(\sqrt{2})^k \sin\left(k \cdot \frac{\pi}{2}\right),$$

where  $k \in \mathbb{N}_0$ , and where  $c_1, c_2, c_3, c_4 \in \mathbb{R}$  are arbitrary constants.

**Example 5.27** Let the sequence  $x_k$  fulfil the difference equation

$$x_k + 16x_{k-4} = 17(-1)^k, \quad k \geq 4,$$

where also  $x_0 = 1$ ,  $x_1 = -1$ ,  $x_2 = 9$  and  $x_3 = -1$ . Calculate  $x_{400}$ .

**A.** Linear inhomogeneous difference equation of fourth order. We shall only find  $x_{400}$ .

**D.** Put  $y_k = x_{4k}$ ,  $y_{100} = x_{400}$ , and set up another difference equation.


**I.** If we put  $y_k = x_{4k}$ , then we get the difference equation

$$y_k + 16y_{k-1} = 16, \quad k \geq 1,$$

where  $y_0 = x_0 = 1$ . It is immediately seen that  $y_k = 1$ ,  $k \in \mathbb{N}_0$ , is a solution of the inhomogeneous equation, which also satisfies the condition. We therefore conclude that this is the wanted solution, hence

$$y_{100} = x_{400} = 1.$$

Please click the advert



# CHALLENGE YOURSELF

## WWW.STUDYINSWEDEN.SE

Today's job market values ambitious, innovative, perceptive team players. Swedish universities foster these qualities through a forward-thinking culture where you're close to the latest ideas and global trends.

Whatever your career goals may be, studying in Sweden will give you valuable skills and a competitive advantage for your future. [www.studyinsweden.se](http://www.studyinsweden.se)

**Si.**  
Swedish Institute

Download free books at BookBooN.com

**Example 5.28** The so-called Fibonacci numbers  $F_n$  are defined as the elements of the sequence which satisfies

$$F_n = F_{n-1} + F_{n-2}, \quad n \geq 2,$$

and the initial conditions  $F_0 = 0$ ,  $F_1 = 1$ .

Find a general formula of the  $n$ -th Fibonacci number  $F_n$ .

The Fibonacci numbers were mentioned for the first time in a book from 1202. They were the solution of the following problem:

Assume that any couple of rabbits which are more than one month of age bear a new couple of rabbits at the end of each month. If one starts with one pair and none of the rabbits die, how many couples of rabbits are there after  $n$  months?

**A.** Linear homogeneous difference equation of second order.

**D.** Find the roots of the characteristic polynomial.

**I.** The characteristic equation  $R^2 = R + 1$ , or  $R^2 - R - 1 = 0$ , has the roots  $R = \frac{1}{2}\{1 \pm \sqrt{5}\}$ , thus the complete solution is

$$F_n = c_1 \left( \frac{1 + \sqrt{5}}{2} \right)^n + c_2 \left( \frac{1 - \sqrt{5}}{2} \right)^n, \quad n \in \mathbb{N}_0, \quad c_1, c_2 \in \mathbb{R}.$$

It follows from the initial conditions that  $F_0 = 0 = c_1 + c_2$  and

$$F_1 = 1 = c_1 \cdot \frac{1 + \sqrt{5}}{2} + c_2 \cdot \frac{1 - \sqrt{5}}{2} = \frac{1}{2}(c_1 + c_2) + \frac{\sqrt{5}}{2}(c_1 - c_2).$$

Hence

$$\begin{cases} c_1 + c_2 = 0, \\ c_1 - c_2 = \frac{2}{\sqrt{5}}, \end{cases} \quad \text{i.e.} \quad \begin{cases} c_1 = \frac{1}{\sqrt{5}}, \\ c_2 = -\frac{1}{\sqrt{5}}, \end{cases}$$

and the solution is

$$F_n = \frac{1}{\sqrt{5}} \left( \frac{1 + \sqrt{5}}{2} \right)^n - \frac{1}{\sqrt{5}} \left( \frac{1 - \sqrt{5}}{2} \right)^n, \quad n \in \mathbb{N}_0.$$

**Example 5.29** We consider in the usual plane  $n$  lines where each pair intersects each other, and where no three lines intersect at the same point. Let  $A_n$  denote the number of domains which the plane is divided in by these lines.

- 1) Calculate  $A_2$  and  $A_3$ .
- 2) What is the connection between  $A_n$  and  $A_{n-1}$ ? Use the result to find a formula for  $A_n$  for every  $n \geq 2$ .

**A.** The setup of a difference equation.

**D.** Analyze  $A_2$  and  $A_3$ , and the general case.

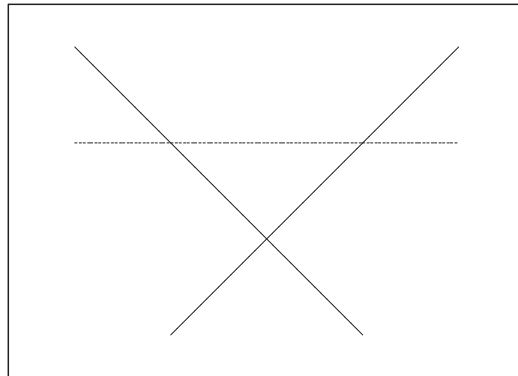


Figure 1: The case of 2 lines and 3 lines.

- I.** 1) Clearly,  $A_2 = 4$ , and it follows by the figure that  $A_3 = 7$ .
- 2) Given  $n - 1$  lines satisfying the conditions of the text. When we add the  $n$ -th line we get under the same assumptions as above  $n - 1$  intersection points with the other lines, so the new line is divided into  $n$  segments. Each of these segments will provide us with a new subdomain, so the connection between  $A_{n-1}$  and  $A_n$  becomes

$$A_n = A_{n-1} + n, \quad \text{i.e.} \quad A_n - A_{n-1} = n.$$

- 3) Clearly, all solutions of the homogeneous difference equation are the constant sequences  $A_n = c$ . Then we guess of a particular solution of the form

$$A_n = \alpha n^2 + \beta n,$$

from which we get by insertion

$$A_n - A_{n-1} = \alpha \{n^2 - (n-1)^2\} + \beta \{n - (n-1)\} = 2n\alpha + (\beta - \alpha).$$

This expression is equal to  $n$  for  $\alpha = \frac{1}{2} = \beta$ , so the complete solution becomes

$$A_n = \frac{1}{2}n^2 + \frac{1}{2}n + c = \frac{1}{2}n(n+1) + c, \quad n \in \mathbb{N}, \quad c \in \mathbb{R}.$$



It follows from the condition

$$A_2 = 4 = \frac{1}{2} \cdot 2 \cdot (2 + 1) + c = 3 + c,$$

that  $c = 1$ , so the final solution becomes

$$A_n = \frac{1}{2}n(n + 1) + 1, \quad n \in \mathbb{N}.$$

**Example 5.30** We shall by a binary sequence of length  $n$  understand  $n$  binary numbers in a given order, where the binary numbers are 0 and 1. Find the number  $A_n$  of all such sequences, which do not contain two successive zeros.

Let  $B_n$  denote the number of sequences which satisfies the condition above and which also end by 1. Similarly, let  $C_n$  denote the number of sequences satisfying the condition above and ending on 0.

- 1) Find  $A_1$ ,  $A_2$  and  $A_3$ .
- 2) What is the connection between  $A_{n+1}$  and  $B_n$  and  $C_n$ ?
- 3) What is the connection between  $A_{n-1}$  and  $B_n$ ?
- 4) Find by means of (2) and (3) a difference equation for  $A_n$ , and find  $A_n$ .

**A.** Setup of a difference equation. The situation is the same as in Example 5.31, although we here have a more complicated equation. By a comparison between the results of the two examples we see that we obtain the same solution.

**D.** Analyze the given situations.

**I.** 1) We get by counting all possible sequences that

- a) If  $n = 1$ , we have the sequences 0, 1, which are both of the desired type, hence  $A_1 = 2$ .
- b) If  $n = 2$ , then we have four possibilities

$$00, \quad 01, \quad 10, \quad 11,$$

of which the latter three satisfy the claim, hence  $A_2 = 3$ .

- c) If  $n = 3$ , then we have eight possibilities,

$$000, \quad 001, \quad \underline{010}, \quad \underline{011}, \quad 100, \quad \underline{101}, \quad \underline{110}, \quad \underline{111},$$

of which the five underlined sequences fulfil the criterion, hence  $A_3 = 5$ .

- 2) It follows immediately that

$$A_{n+1} = 2B_n + C_n.$$

In fact, after a sequence from  $B_n$  can we choose both 0 and 1 (two possibilities), while we after a sequence from  $C_n$  are forced to choose 1, so we have only one possibility.

- 3) Clearly,

$$A_{n-1} = B_n.$$

In fact, every sequence from  $A_{n-1}$  can always be followed by 1 without destroying the condition. The number must therefore be the same.

- 4) Before we can set up a difference equation for  $A_n$ , we have to eliminate  $C_n$ . Every sequence from  $C_n$  has 0 as its last term, so the second last digit must necessarily be 1. This means that

$$C_n = B_{n-1}.$$

We have the three equations

$$A_{n+1} = 2B_n + C_n, \quad A_{n-1} = B_n, \quad C_n = B_{n-1}.$$

Hence,

$$A_{n+1} = 2B_n + C_n = 2B_n + B_{n-1} = 2A_{n-1} + A_{n-2},$$

thus by a shift of index and a rearrangement,

$$A_n - 2A_{n-2} - A_{n-3} = 0, \quad n \geq 3.$$

This is a linear homogeneous difference equation of third order. The characteristic polynomial  $R^3 - 2R - 1$  has the root  $R = -1$ , so

$$R^3 - 2R - 1 = (R + 1)(R^2 - R - 1).$$

Please click the advert

## Turning a challenge into a learning curve. Just another day at the office for a high performer.

### Accenture Boot Camp – your toughest test yet

Choose Accenture for a career where the variety of opportunities and challenges allows you to make a difference every day. A place where you can develop your potential and grow professionally, working alongside talented colleagues. The only place where you can learn from our unrivalled experience, while helping our global clients achieve high performance. If this is your idea of a typical working day, then Accenture is the place to be.

It all starts at Boot Camp. It's 48 hours that will stimulate your mind and enhance your career prospects. You'll spend time with other students, top Accenture Consultants and special guests. An inspirational two days

packed with intellectual challenges and activities designed to let you discover what it really means to be a high performer in business. We can't tell you everything about Boot Camp, but expect a fast-paced, exhilarating

and intense learning experience. It could be your toughest test yet, which is exactly what will make it your biggest opportunity.

Find out more and apply online.

Visit [accenture.com/bootcamp](http://accenture.com/bootcamp)

• Consulting • Technology • Outsourcing

  
High performance. Delivered.

Hence we find the three simple roots

$$R = -1 \quad \text{and} \quad R = \frac{1}{2} \pm \frac{\sqrt{5}}{2} = \frac{1}{2}(1 \pm \sqrt{5}).$$

Thus, the complete solution is

$$A_n = c_n(-1)^n + c_2 \left( \frac{1 + \sqrt{5}}{2} \right)^n + c_3 \left( \frac{1 - \sqrt{5}}{2} \right)^n, \quad n \in \mathbb{N},$$

where  $c_1, c_2, c_3 \in \mathbb{R}$  are arbitrary constants.

We get the following conditions from (1),

$$\begin{aligned} A_1 &= 2 = -c_1 + c_2 \cdot \frac{1 + \sqrt{5}}{2} + c_3 \cdot \frac{1 - \sqrt{5}}{2}, \\ A_2 &= 3 = +c_1 + c_2 \cdot \left( \frac{1 + \sqrt{5}}{2} \right)^2 + c_3 \cdot \left( \frac{1 - \sqrt{5}}{2} \right)^2, \\ A_3 &= 5 = -c_1 + c_2 \cdot \left( \frac{1 + \sqrt{5}}{2} \right)^3 + c_3 \cdot \left( \frac{1 - \sqrt{5}}{2} \right)^3, \end{aligned}$$

hence

$$\begin{aligned} 2 &= -c_1 + \frac{1}{2}(c_2 + c_3) + \frac{\sqrt{5}}{2}(c_2 - c_3), \\ 3 &= +c_1 + \frac{3}{2}(c_2 + c_3) + \frac{\sqrt{5}}{2}(c_2 - c_3), \\ 5 &= -c_1 + 2(c_2 + c_3) + \sqrt{5}(c_2 - c_3), \end{aligned}$$

and thus

$$c_1 = 0, \quad c_2 = \frac{5 + 3\sqrt{5}}{10}, \quad \text{og} \quad c_3 = \frac{5 - 3\sqrt{5}}{10}.$$

The solution is

$$\begin{aligned} A_n &= \frac{5 + 3\sqrt{5}}{10} \left( \frac{1 + \sqrt{5}}{2} \right)^n + \frac{5 - 3\sqrt{5}}{10} \left( \frac{1 - \sqrt{5}}{2} \right)^n \\ &= \frac{1}{\sqrt{5}} \left( \frac{1 + \sqrt{5}}{2} \right)^{n+2} - \frac{1}{\sqrt{5}} \left( \frac{1 - \sqrt{5}}{2} \right)^{n+2}, \quad n \in \mathbb{N}. \end{aligned}$$

**Example 5.31** *A coin is thrown  $n$  times. For each throw we notice whether we have got heads or tails, and the total result can be described by a sequence like  $HHTH \dots TT$ . There are in total  $2^n$  such sequences. The problem is to find the probability of that one in such a sequence does not get two tails successively.*

Let  $A_n$  denote the number of sequences with the desired property, and let  $p_n$  denote the unknown probability.

1) Prove that  $A_n$  fulfils the difference equation

$$A_{n+1} = A_n + A_{n-1}, \quad n \geq 2.$$

2) Find  $p_n$  and  $\lim_{n \rightarrow +\infty} p_n$ .

**A.** Difference equation. If we write 0 instead of  $T$ , and 1 instead of  $H$ , the situation is analogous to the one in Example 5.30, and the solution  $A_n$  ought to be the same. Note that the difference equation here is simpler than the one in Example 5.30.

**D.** Analyze how we get the difference equation. Then solve the equation and find  $p_n$ .

**I.** 1) Let us consider an element from  $\mathcal{A}_n$ . Then we have two possibilities:

- a) If the element terminates with a  $T$ , will the next element only be included, if the next throw is an  $H$ . We denote the number of elements by  $A_{n,K}$ .
- b) If the element terminates with an  $H$  (and the number is  $A_{n,H}$ ), then we can allow both  $H$  and  $T$  in the next throw, thus

$$A_{n+1} = A_{n,K} + 2A_{n,H} = (A_{n,K} + A_{n,H}) + A_{n,H} = A_n + A_{n,H}.$$

Then  $A_{n,H}$  must be equal to  $A_{n-1}$ , because one after each element, which contributes to  $A_{n-1}$ , can allow  $H$  to be the next digit, when we have a contribution to  $A_{n,H}$ , and every contribution to  $A_{n,H}$  is obtained in this way. Then

$$A_{n+1} = A_n + A_{n-1}, \quad n \geq 2.$$

2) Then we get by a rearrangement that

$$A_n - A_{n-1} - A_{n-2} = 0, \quad n \geq 3.$$

This is a linear, homogeneous difference equation of second order. The characteristic polynomial  $R^2 - R - 1$  has the two simple roots

$$R = \frac{1 \pm \sqrt{5}}{2}.$$

Hence the complete solution is

$$A_n = c_1 \left( \frac{1 + \sqrt{5}}{2} \right)^n + c_2 \left( \frac{1 - \sqrt{5}}{2} \right)^n, \quad n \in \mathbb{N}_0, \quad c_1, c_2 \in \mathbb{R}.$$

By a counting of the possibilities we get

- a) If  $n = 1$ , then we have the two possibilities  $H$  and  $T$ , hence  $A_1 = 2$ .

b) If  $n = 2$ , then we have the four possibilities

$$HH, \quad HT, \quad TH, \quad TT,$$

the first three of which satisfy the conditions, hence  $A_2 = 3$ .

Thus, we have the following equations for  $c_1$  and  $c_2$ ,

$$\begin{aligned} A_1 = 2 &= c_1 \cdot \frac{1 + \sqrt{5}}{2} + c_2 \cdot \frac{1 - \sqrt{5}}{2} = \frac{1}{2}(c_1 + c_2) + \frac{\sqrt{5}}{2}(c_1 - c_2), \\ A_2 = 3 &= c_1 \cdot \left(\frac{1 + \sqrt{5}}{2}\right)^2 + c_2 \cdot \left(\frac{1 - \sqrt{5}}{2}\right)^2 = \frac{3}{2}(c_1 + c_2) + \frac{\sqrt{5}}{2}(c_1 - c_2), \end{aligned}$$

hence,  $c_1 + c_2 = 1$  and  $c_1 - c_2 = \frac{3}{\sqrt{5}}$ , so

$$\begin{aligned} c_1 &= \frac{1}{\sqrt{5}} \cdot \frac{\sqrt{5} + 3}{2} = \frac{1}{\sqrt{5}} \left(\frac{1 + \sqrt{5}}{2}\right)^2, \\ c_2 &= \frac{1}{\sqrt{5}} \cdot \frac{\sqrt{5} - 3}{2} = -\frac{1}{\sqrt{5}} \left(\frac{1 - \sqrt{5}}{2}\right)^2, \end{aligned}$$

This gives us the solution

$$A_n = \frac{1}{\sqrt{5}} \left(\frac{1 + \sqrt{5}}{2}\right)^{n+2} - \frac{1}{\sqrt{5}} \left(\frac{1 - \sqrt{5}}{2}\right)^{n+2}, \quad n \in \mathbb{N},$$

and thus

$$p_n = \frac{1}{2^n} A_n = \frac{4}{\sqrt{5}} \left(\frac{1 + \sqrt{5}}{4}\right)^{n+2} - \frac{4}{\sqrt{5}} \left(\frac{1 - \sqrt{5}}{4}\right)^{n+2}, \quad n \in \mathbb{N}.$$

From  $\sqrt{5} < 3$ , follows that  $\left|\frac{1 \pm \sqrt{5}}{4}\right| < 1$ , so  $\left(\frac{1 \pm \sqrt{5}}{4}\right)^n \rightarrow 0$  for  $n \rightarrow +\infty$ , and we have

$$\lim_{n \rightarrow +\infty} p_n = 0.$$